

Please check the examination details below before entering your candidate information

Candidate surname

Other names

Centre Number

Candidate Number

--	--	--	--	--

--	--	--	--	--

Pearson Edexcel International Advanced Level

Monday 8 January 2024

Morning (Time: 1 hour 45 minutes)

Paper
reference

WCH14/01

Chemistry

International Advanced Level

**UNIT 4: Rates, Equilibria and Further Organic
Chemistry**

You must have:

Scientific calculator, Data Booklet, ruler

Total Marks

Instructions

- Use **black** ink or ball-point pen.
- If pencil is used for diagrams/sketches/graphs it must be dark (HB or B).
- **Fill in the boxes** at the top of this page with your name, centre number and candidate number.
- Answer **all** questions.
- Answer the questions in the spaces provided
– *there may be more space than you need.*

Information

- The total mark for this paper is 90.
- The marks for **each** question are shown in brackets
– *use this as a guide as to how much time to spend on each question.*
- In the question marked with an **asterisk (*)**, marks will be awarded for your ability to structure your answer logically, showing how the points that you make are related or follow on from each other where appropriate.
- A Periodic Table is printed on the back cover of this paper.

Advice

- Read each question carefully before you start to answer it.
- Show all your working in calculations and include units where appropriate.
- Try to answer every question.
- Check your answers if you have time at the end.

Turn over ►

P73456A

©2024 Pearson Education Ltd.
S:1/1/1/



Pearson

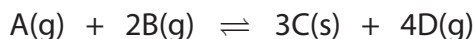
SECTION A

Answer ALL the questions in this section.

You should aim to spend no more than 20 minutes on this section.

For each question, select one answer from A to D and put a cross . If you change your mind, put a line through the box and then mark your new answer with a cross .

- 1 The equation for a reaction is shown.



- (a) Some collisions between reactant molecules do not lead to the formation of products.

What is the best explanation for this?

(1)

- A the reactant concentrations are too low
- B the collisions do not have sufficient energy
- C the reaction is at equilibrium
- D the molecules do not collide in the correct ratio

- (b) What are the units of the equilibrium constant, K_p , for this reaction?

(1)

- A atm
- B atm^{-1}
- C atm^4
- D atm^{-4}

(Total for Question 1 = 2 marks)

- 2 Nitrogen(V) oxide, N_2O_5 , decomposes in a first order reaction.

At 45°C , the half-life for this reaction is 1400 s.

In an experiment, the initial concentration of nitrogen(V) oxide is 1.0 mol dm^{-3} .

What is the concentration, in mol dm^{-3} , of nitrogen(V) oxide after 4200 s?

- A 0.875
- B 0.500
- C 0.250
- D 0.125

(Total for Question 2 = 1 mark)

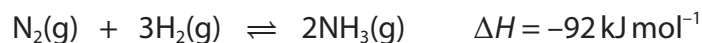
DO NOT WRITE IN THIS AREA

DO NOT WRITE IN THIS AREA

DO NOT WRITE IN THIS AREA



- 3 Ammonia is produced by the reaction of nitrogen with hydrogen in the presence of an iron catalyst.



- (a) Which of the following statements about the catalyst is **not** correct? (1)

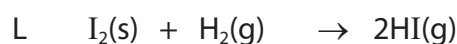
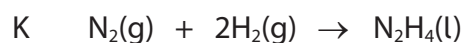
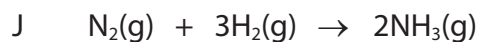
- A it lowers the activation energy of the reaction
- B it has no effect on the equilibrium constant for the reaction
- C it alters the enthalpy change of the reaction
- D it reduces the energy cost of the reaction

- (b) Which conditions favour the highest percentage of ammonia in an equilibrium mixture from identical amounts of nitrogen and hydrogen? (1)

- A a temperature of 400 K and a pressure of 200 kPa
- B a temperature of 400 K and a pressure of 200 atm
- C a temperature of 400 °C and a pressure of 200 kPa
- D a temperature of 400 °C and a pressure of 200 atm

(Total for Question 3 = 2 marks)

- 4 The equations for three reactions involving hydrogen are shown.



What is the order of **increasing** standard entropy change of the system, $\Delta S_{\text{system}}^\ominus$, for these reactions?

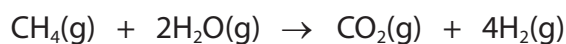
- A J, K, L
- B K, L, J
- C K, J, L
- D L, K, J

(Total for Question 4 = 1 mark)

Use this space for any rough working. Anything you write in this space will gain no credit.



- 5 Methane reacts with steam to produce carbon dioxide and hydrogen.



The standard molar entropies of the reactants and products are given in the table.

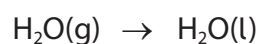
Substance	$S^\ominus / \text{JK}^{-1} \text{mol}^{-1}$
$\text{CH}_4(\text{g})$	186
$\text{H}_2\text{O}(\text{g})$	189
$\text{CO}_2(\text{g})$	214
$\text{H}_2(\text{g})$	131

The value of $\Delta S_{\text{system}}^\ominus$ for this reaction, in $\text{JK}^{-1} \text{mol}^{-1}$, is

- A -174
- B -30
- C +30
- D +174

(Total for Question 5 = 1 mark)

- 6 What are the signs of the entropy changes at 373 K when water vapour condenses?



	ΔS_{system}	$\Delta S_{\text{surroundings}}$
<input type="checkbox"/> A	positive	positive
<input type="checkbox"/> B	positive	negative
<input type="checkbox"/> C	negative	positive
<input type="checkbox"/> D	negative	negative

(Total for Question 6 = 1 mark)

Use this space for any rough working. Anything you write in this space will gain no credit.



7 At 50 °C, the ionic product of water, K_w , is $5.5 \times 10^{-14} \text{ mol}^2 \text{ dm}^{-6}$.

At this temperature, water is

- A neutral with a pH of 7.0
- B neutral with a pH of 6.6
- C acidic with a pH of 6.6
- D alkaline with a pH of 7.4

(Total for Question 7 = 1 mark)

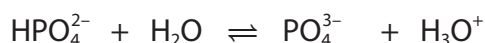
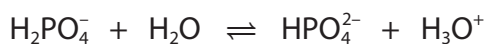
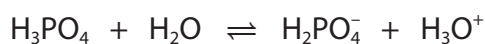
8 Equimolar solutions of four acids are prepared. Which solution has the **lowest** pH?

Use electronegativity values from the Data Booklet.

- A CH_3COOH
- B CH_2ClCOOH
- C CH_2BrCOOH
- D CH_2ICOOH

(Total for Question 8 = 1 mark)

9 Some equations for acid-base equilibria are shown.



What is the conjugate acid of HPO_4^{2-} ?

- A H_3PO_4
- B H_3O^+
- C H_2PO_4^-
- D PO_4^{3-}

(Total for Question 9 = 1 mark)

Use this space for any rough working. Anything you write in this space will gain no credit.



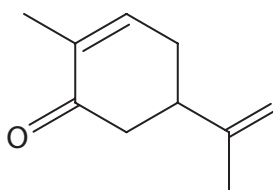
10 What is the pH of a $0.200 \text{ mol dm}^{-3}$ solution of strontium hydroxide, $\text{Sr}(\text{OH})_2$?

$$K_w = 1.00 \times 10^{-14} \text{ mol}^2 \text{ dm}^{-6}$$

- A 14.0
- B 13.6
- C 13.3
- D 12.6

(Total for Question 10 = 1 mark)

11 Carvone is an oil used in aromatherapy.



(a) Carvone shows

- A geometric and optical isomerism
- B geometric isomerism only
- C optical isomerism only
- D neither geometric nor optical isomerism

(1)

(b) Which reagent gives a positive result when added to carvone?

- A ammoniacal silver nitrate (Tollens' reagent)
- B aqueous sodium carbonate
- C iodine in the presence of an alkali
- D 2,4-dinitrophenylhydrazine

(1)

(c) How many peaks would be expected to appear in a carbon-13 (^{13}C) NMR spectrum of carvone?

- A 10
- B 9
- C 8
- D 7

(1)

(Total for Question 11 = 3 marks)



12 From which two reactants could $\text{CH}_3(\text{CH}_2)_2\text{COO}(\text{CH}_2)_4\text{CH}_3$ be made?

- A butanoic acid and pentan-1-ol
- B butanoyl chloride and butan-1-ol
- C butanal and pentan-1-ol
- D pentanoic acid and butan-1-ol

(Total for Question 12 = 1 mark)

13 The reaction between ethanoic acid and lithium tetrahydridoaluminate(III) is best described as

- A elimination
- B oxidation
- C reduction
- D substitution

(Total for Question 13 = 1 mark)

14 Which substance is the least soluble in water?

- A propanal
- B propan-1-ol
- C propanoic acid
- D sodium propanoate

(Total for Question 14 = 1 mark)

Use this space for any rough working. Anything you write in this space will gain no credit.



15 (a) The mass spectrum of compound **X** shows a large peak at $m/z = 59$.

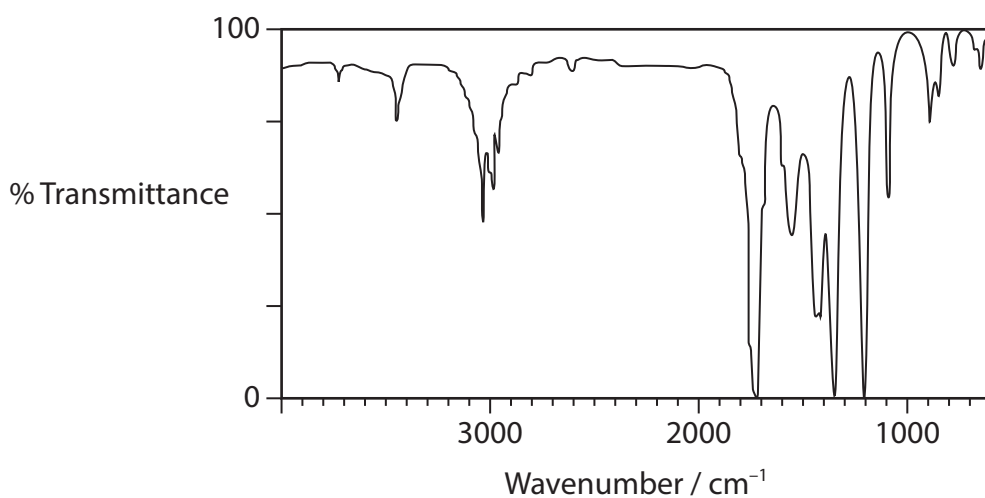
This peak is due to the fragmentation of the molecular ion.

Which compound is most likely to be **X**?

(1)

- A** 2-methylpropan-2-ol
- B** pentane
- C** propanal
- D** propanone

(b) Compound **Y** does not react with acidified aqueous sodium dichromate.
The infrared spectrum of **Y** is shown.



Which compound is most likely to be **Y**? Refer to the Data Booklet.

(1)

- A** 2-methylpropan-2-ol
- B** pentane
- C** propanal
- D** propanone

(Total for Question 15 = 2 marks)

TOTAL FOR SECTION A = 20 MARKS

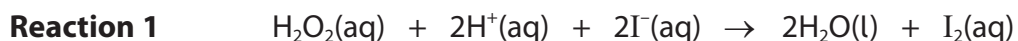


SECTION B

Answer ALL the questions. Write your answers in the spaces provided.

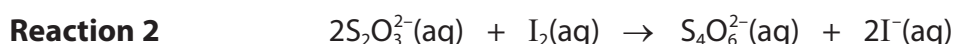
16 A group of students investigated the kinetics of a 'clock' reaction.

The reaction investigated was that between hydrogen peroxide and iodide ions in the presence of acid.



In this 'clock' reaction, a fixed volume of aqueous sodium thiosulfate, $\text{Na}_2\text{S}_2\text{O}_3$, and a small amount of starch were added to the reaction mixture.

The added thiosulfate ions react with the iodine produced in **Reaction 1**.



When all the thiosulfate ions have reacted, the presence of iodine is detected by the formation of a starch-iodine complex. The students recorded the time taken for this complex to form.

(a) (i) State the final colour of the mixture containing the starch-iodine complex. (1)

(ii) Under appropriate conditions, the reciprocal of time can be used as an approximate measure of the initial rate of the reaction.

Explain why the concentration of the sodium thiosulfate must be low compared with the initial concentrations of the other reagents. (2)

DO NOT WRITE IN THIS AREA

DO NOT WRITE IN THIS AREA

DO NOT WRITE IN THIS AREA



P 7 3 4 5 6 A 0 9 2 8

- (b) Four reaction mixtures, with different initial concentrations of hydrogen peroxide, hydrogen ions and iodide ions, were prepared.

Each mixture had the same volume and contained the same amount of sodium thiosulfate and starch.

Mixture	[H ₂ O ₂] / mol dm ⁻³	[H ⁺] / mol dm ⁻³	[I ⁻] / mol dm ⁻³	Time / s	1 ÷ time / s ⁻¹
1	5.4 × 10 ⁻²	1.7 × 10 ⁻⁵	8.2 × 10 ⁻³	195	5.13 × 10 ⁻³
2	2.7 × 10 ⁻²	1.7 × 10 ⁻⁵	8.2 × 10 ⁻³	391	2.56 × 10 ⁻³
3	5.4 × 10 ⁻²	1.7 × 10 ⁻⁵	1.6 × 10 ⁻²	97	1.03 × 10 ⁻²
4	5.4 × 10 ⁻²	1.7 × 10 ⁻⁴	8.2 × 10 ⁻³	204	4.90 × 10 ⁻³

- (i) Use the results in the table to deduce the order of **Reaction 1** with respect to hydrogen peroxide, hydrogen ions and iodide ions.
Justify each answer by referring to relevant data from the table.

(3)

Hydrogen peroxide

.....

Hydrogen ions

.....

Iodide ions

.....

- (ii) Write the overall rate equation for **Reaction 1** using your answers to (b)(i).

(1)

- (iii) All four mixtures contained 8.50×10^{-5} mol of sodium thiosulfate.
Calculate the amount of iodine that had reacted with the sodium thiosulfate when the colour changed in **Reaction 2**.

(1)



- (iv) Calculate the rate of reaction, in $\text{mol dm}^{-3} \text{ s}^{-1}$, with respect to **hydrogen peroxide** using the answer from (b)(iii), the stoichiometry of **Reaction 1** and data from Mixture 1.
The total volume of **each** Mixture was 0.050 dm^3 .

(2)

- (v) Calculate a value for the rate constant of **Reaction 1** using data from Mixture 1 and your answers to (b)(ii) and (b)(iv).
Include the units of the rate constant.

(2)

DO NOT WRITE IN THIS AREA

DO NOT WRITE IN THIS AREA

DO NOT WRITE IN THIS AREA



P 7 3 4 5 6 A 0 1 1 2 8

(c) The activation energy for **Reaction 1** may be found by repeating the experiment at different temperatures.

Each student carried out an experiment at a different temperature.

One of the students misread the thermometer in their experiment.

ln rate	T / K	$1 \div T / \text{K}^{-1}$
-1.8	333	0.00300
-2.5	323	0.00310
-3.6	308	0.00325
-4.0	307	0.00326
-4.7	291.5	0.00343
-6.0	278	0.00360

The activation energy, E_a , for a reaction may be found by plotting a graph of ln rate against $1/T$.

The gradient of the resulting line of best fit can be used in the Arrhenius equation to determine a value for E_a , in kJ mol^{-1} .

(i) Determine the value for E_a for **Reaction 1** by plotting a graph using the axes provided.

You should take into account the error made by one of the students.

$$\ln \text{rate} = -\frac{E_a}{R} \times \frac{1}{T} + \text{constant} \quad R = 8.31 \text{ J K}^{-1} \text{ mol}^{-1}$$

(5)



DO NOT WRITE IN THIS AREA

DO NOT WRITE IN THIS AREA

DO NOT WRITE IN THIS AREA



E_a kJ mol⁻¹

- (ii) The students all used thermometers capable of reading to the same precision. Use your graph to deduce the temperature that the student who made the error should have read on their thermometer.

(2)

(Total for Question 16 = 19 marks)



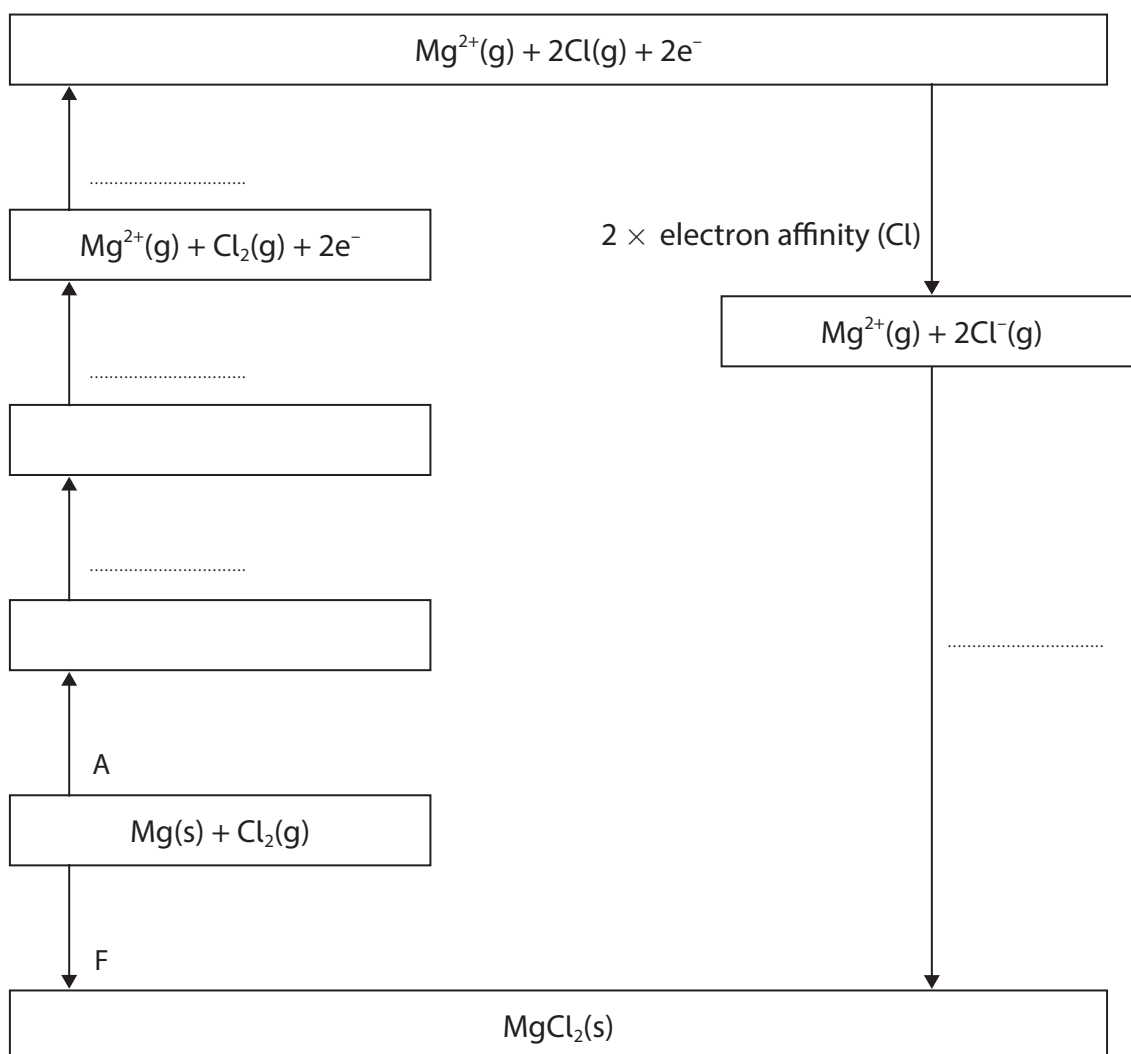
17 The question is about lattice energies.

The table shows energy values used in a Born–Haber cycle for magnesium chloride, MgCl_2 .

Energy change	Label	Value / kJ mol^{-1}
Enthalpy change of atomisation of magnesium	A	+148
First ionisation energy of magnesium	B	+738
Second ionisation energy of magnesium	C	+1451
Enthalpy change of atomisation of chlorine	D	+122
Lattice energy of magnesium chloride	E	-2526
Enthalpy change of formation of magnesium chloride	F	-641

- (a) (i) Complete the Born–Haber cycle for magnesium chloride by adding labels for each of the four energy changes and writing formulae in the two empty boxes.

(3)



(ii) Calculate a value for the electron affinity of chlorine, in kJ mol^{-1} , using the data in the table and the completed Born–Haber cycle.

(2)

(iii) Explain why, when magnesium reacts with chlorine, MgCl_2 is formed rather than MgCl_3 .

(2)

(iv) Calculate the standard molar enthalpy change of solution of magnesium chloride, in kJ mol^{-1} , using the data shown and the value for the lattice energy, $\text{LE}[\text{MgCl}_2]$, given in the table.

$$\text{Data } \Delta_{\text{hyd}}H^{\ominus}[\text{Mg}^{2+}(\text{g})] = -1920 \text{ kJ mol}^{-1} \quad \Delta_{\text{hyd}}H^{\ominus}[\text{Cl}^{-}(\text{g})] = -364 \text{ kJ mol}^{-1}$$

(2)

DO NOT WRITE IN THIS AREA

DO NOT WRITE IN THIS AREA

DO NOT WRITE IN THIS AREA



P 7 3 4 5 6 A 0 1 5 2 8

DO NOT WRITE IN THIS AREA

DO NOT WRITE IN THIS AREA

DO NOT WRITE IN THIS AREA

Handwriting practice area with 20 horizontal dotted lines.


(Total for Question 17 = 15 marks)

Blank area for the answer to Question 17.



P 7 3 4 5 6 A 0 1 7 2 8

18 Methyl 2-hydroxypropanoate is used as an industrial solvent.
It may be prepared in three steps using ethanal as the starting material.



- (a) Name the reagent(s) in Step 1 and Step 2. (2)

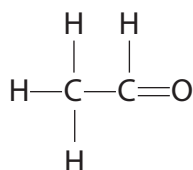
Step 1

Reagent(s).....

Step 2

Reagent(s).....

- (b) (i) Complete the mechanism for Step 1, using curly arrows and relevant lone pairs, charges and dipoles. (4)



(ii) Explain why the 2-hydroxypropanoic acid, $\text{CH}_3\text{CH}(\text{OH})\text{COOH}$, produced is **not** optically active.

(3)

.....

.....

.....

.....

.....

.....

(c) (i) State the type of reaction in Step 3.

(1)

.....

(ii) A small amount of a polymeric compound is formed during Step 3. Deduce the structure for the repeat unit of the polymer formed.

(1)

DO NOT WRITE IN THIS AREA

DO NOT WRITE IN THIS AREA

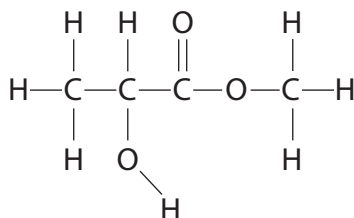
DO NOT WRITE IN THIS AREA



- (d) The high-resolution proton nuclear magnetic resonance (NMR) spectrum of methyl 2-hydroxypropanoate gives four peaks, **J**, **K**, **L** and **M**. Peaks **L** and **M** are **singlets** with relative intensities of **one** and **three** respectively.

- (i) Label the displayed formula to show the protons responsible for these two peaks.

(2)



- (ii) Complete the table to show the expected number of hydrogen atoms and expected splitting pattern for peaks **J** and **K**.

(2)

Peak	δ / ppm	Number of hydrogen atoms	Splitting pattern
J	1.3		
K	4.1		
L	3.6	1	singlet
M	3.7	3	singlet

(Total for Question 18 = 15 marks)

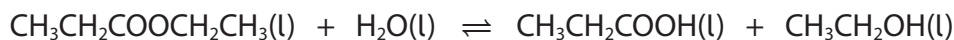
TOTAL FOR SECTION B = 49 MARKS



SECTION C

Answer ALL the questions. Write your answers in the spaces provided.

- 19 (a) Ethyl propanoate, $\text{CH}_3\text{CH}_2\text{COOCH}_2\text{CH}_3$, smells of pineapple and is used as a flavouring. It may be hydrolysed using hydrochloric acid as a catalyst to produce propanoic acid and ethanol.



A mixture was prepared using 0.100 mol of ethyl propanoate and 0.200 mol of water containing the catalyst.

The mixture was left to reach equilibrium at 25 °C.

The equilibrium mixture contained 0.0440 mol of propanoic acid.

- (i) Calculate the value for K_c for this equilibrium at 25 °C.
Give your answer to an appropriate number of significant figures.

(4)

- (ii) The standard enthalpy change, $\Delta_r H^\ominus$, for this reaction is close to, but not exactly zero. Explain this statement by considering the type and number of bonds being broken and made. No calculations are required.

(2)

.....

.....

.....

.....

.....



P 7 3 4 5 6 A 0 2 1 2 8

(iii) Deduce the effect of increasing the temperature on the total entropy change of this reaction, ΔS_{total} , and on the value of the equilibrium constant, K_c . Assume that ΔS_{system} does not change with temperature.

(3)

.....

.....

.....

.....

.....

.....

.....

(b) Propanoic acid is a weak acid.

(i) State the difference between a weak acid and a strong acid such as hydrochloric acid.

(1)

.....

.....

.....

.....

.....

(ii) Calculate the pH of $0.500 \text{ mol dm}^{-3}$ hydrochloric acid at 25°C .

(1)

DO NOT WRITE IN THIS AREA

DO NOT WRITE IN THIS AREA

DO NOT WRITE IN THIS AREA



(iii) Calculate the pH of $0.500 \text{ mol dm}^{-3}$ propanoic acid at 25°C .

K_a (propanoic acid) = $1.30 \times 10^{-5} \text{ mol dm}^{-3}$ at 25°C .

(3)

(c) The number of moles of propanoic acid in a solution may be determined by titration with aqueous sodium hydroxide.

(i) Calculate the pH at the point in the titration where half the acid has been neutralised. You must show your working.

(2)

DO NOT WRITE IN THIS AREA

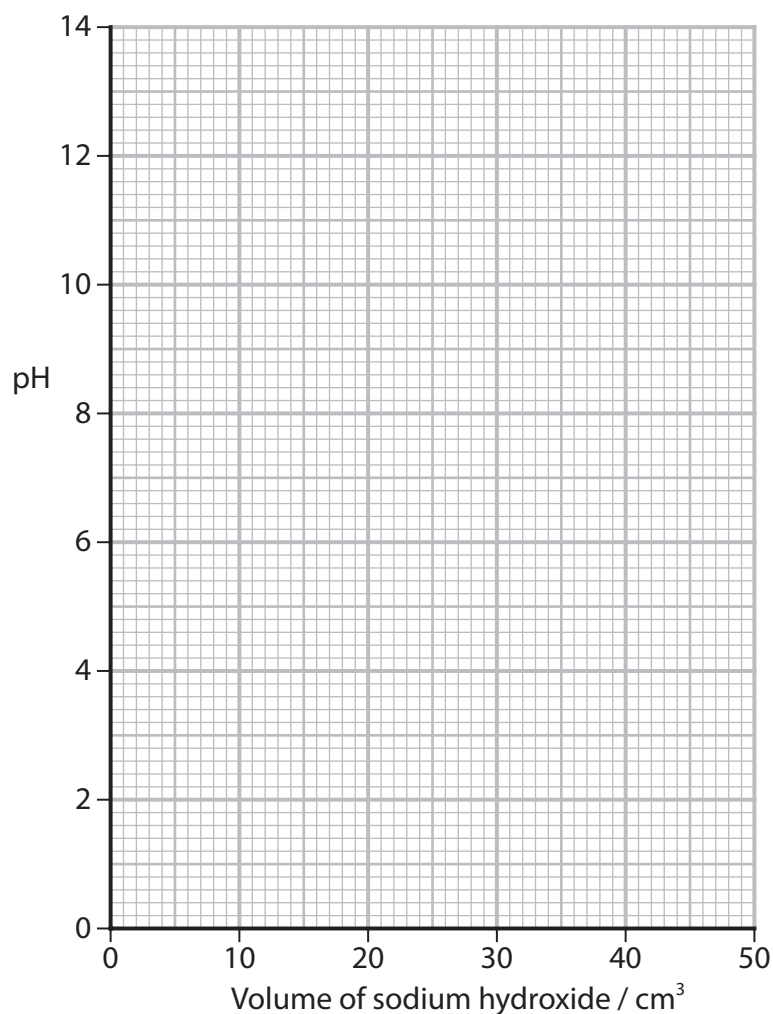
DO NOT WRITE IN THIS AREA

DO NOT WRITE IN THIS AREA



- (ii) Sketch the titration curve showing the change in pH when 50 cm^3 of 0.500 mol dm^{-3} sodium hydroxide is added to 25.0 cm^3 of propanoic acid of the same concentration, using your answers to (b)(iii) and (c)(i).

(3)



- (iii) Suggest a suitable indicator for this titration. Justify your choice by referring to your titration curve in (c)(ii). Use the Data Booklet.

(2)

.....

.....

.....

.....

.....

(Total for Question 19 = 21 marks)

TOTAL FOR SECTION C = 21 MARKS
TOTAL FOR PAPER = 90 MARKS



DO NOT WRITE IN THIS AREA

DO NOT WRITE IN THIS AREA

DO NOT WRITE IN THIS AREA

BLANK PAGE



P 7 3 4 5 6 A 0 2 5 2 8

DO NOT WRITE IN THIS AREA

DO NOT WRITE IN THIS AREA

DO NOT WRITE IN THIS AREA

BLANK PAGE



DO NOT WRITE IN THIS AREA

DO NOT WRITE IN THIS AREA

DO NOT WRITE IN THIS AREA

BLANK PAGE



P 7 3 4 5 6 A 0 2 7 2 8

The Periodic Table of Elements

1 2 3 4 5 6 7 0 (8) (18)

1.0	H	hydrogen	1
-----	----------	----------	---

Key

relative atomic mass
atomic symbol
name
atomic (proton) number

(1) (2)

6.9	Li	lithium	3
9.0	Be	beryllium	4
23.0	Na	sodium	11
24.3	Mg	magnesium	12

39.1	K	potassium	19
85.5	Rb	rubidium	37
132.9	Cs	caesium	55

45.0	Sc	scandium	21
47.9	Ti	titanium	22
50.9	V	vanadium	23
52.0	Cr	chromium	24
54.9	Mn	manganese	25
55.8	Fe	iron	26
58.9	Co	cobalt	27
58.7	Ni	nickel	28
63.5	Cu	copper	29
65.4	Zn	zinc	30
69.7	Ga	gallium	31
72.6	Ge	germanium	32
74.9	As	arsenic	33
75.9	Se	selenium	34
79.0	Br	bromine	35
83.8	Kr	krypton	36

88.9	Y	yttrium	39
87.6	Sr	strontium	38
138.9	Ba	barium	56
178.5	Hf	hafnium	72
180.9	Ta	tantalum	73
186.2	Re	rhenium	75
190.2	Os	osmium	76
192.2	Ir	iridium	77
195.1	Pt	platinum	78
197.0	Au	gold	79
200.6	Hg	mercury	80
204.4	Tl	thallium	81
207.2	Pb	lead	82
209.0	Bi	bismuth	83
210	At	astatine	85
210	Rn	radon	86

102.9	Rh	rhodium	45
102.9	Pd	palladium	46
106.4	Ag	silver	47
107.9	Cd	cadmium	48
112.4	In	indium	49
114.8	Sn	tin	50
118.7	Sb	antimony	51
121.8	Te	tellurium	52
127.6	Po	polonium	84

10.8	B	boron	5
12.0	C	carbon	6
14.0	N	nitrogen	7
16.0	O	oxygen	8
14.0	N	nitrogen	7
15.0	P	phosphorus	15
16.0	S	sulfur	16
17.0	Cl	chlorine	17
18.0	Ar	argon	18

4.0	He	helium	2
20.2	Ne	neon	10
39.9	Ar	argon	18

Elements with atomic numbers 112-116 have been reported but not fully authenticated

140	Ce	cerium	58
141	Pr	praseodymium	59
144	Nd	neodymium	60
147	Pm	promethium	61
150	Sm	samarium	62
152	Eu	europium	63
157	Gd	gadolinium	64
159	Tb	terbium	65
163	Dy	dysprosium	66
165	Ho	holmium	67
167	Er	erbium	68
169	Tm	thulium	69
173	Yb	ytterbium	70
175	Lu	lutetium	71
232	Th	thorium	90
231	Pa	protactinium	91
238	U	uranium	92
237	Np	neptunium	93
242	Pu	plutonium	94
243	Am	americium	95
247	Cm	curium	96
245	Bk	berkelium	97
251	Cf	californium	98
254	Es	einsteinium	99
253	Fm	fermium	100
256	Md	mendelevium	101
254	No	nobelium	102
257	Lr	lawrencium	103

* Lanthanide series

* Actinide series

DO NOT WRITE IN THIS AREA

DO NOT WRITE IN THIS AREA

DO NOT WRITE IN THIS AREA

