

Please check the examination details below before entering your candidate information

Candidate surname

Other names

Centre Number

Candidate Number

--	--	--	--	--

--	--	--	--

Pearson Edexcel International Advanced Level

Friday 2 June 2023

Morning (Time: 1 hour 45 minutes)

Paper
reference

WCH14/01

Chemistry

International Advanced Level

**UNIT 4: Rates, Equilibria and Further Organic
Chemistry**

You must have:

Scientific calculator, Data Booklet, ruler

Total Marks

Instructions

- Use **black** ink or ball-point pen.
- If pencil is used for diagrams/sketches/graphs it must be dark (HB or B).
- **Fill in the boxes** at the top of this page with your name, centre number and candidate number.
- Answer **all** questions.
- Answer the questions in the spaces provided – *there may be more space than you need.*

Information

- The total mark for this paper is 90.
- The marks for **each** question are shown in brackets – *use this as a guide as to how much time to spend on each question.*
- In the question marked with an **asterisk (*)**, marks will be awarded for your ability to structure your answer logically, showing how the points that you make are related or follow on from each other where appropriate.
- A Periodic Table is printed on the back cover of this paper.

Advice

- Read each question carefully before you start to answer it.
- Show all your working in calculations and include units where appropriate.
- Try to answer every question.
- Check your answers if you have time at the end.

Turn over ►

P71942A

©2023 Pearson Education Ltd.

N:1/1/1/




Pearson

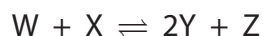
SECTION A

Answer ALL the questions in this section.

You should aim to spend no more than 20 minutes on this section.

For each question, select one answer from A to D and put a cross in the box ☒.
If you change your mind, put a line through the box ☒ and then mark your new answer with a cross ☒.

- 1 A homogeneous equilibrium is shown.

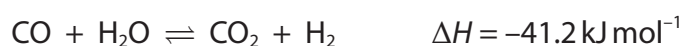


What is the K_c expression for this equilibrium?

- A $K_c = \frac{2[Y][Z]}{[W][X]}$
- B $K_c = \frac{[Y]^2[Z]}{[W][X]}$
- C $K_c = \frac{[W][X]}{2[Y][Z]}$
- D $K_c = \frac{[W][X]}{[Y]^2[Z]}$

(Total for Question 1 = 1 mark)

- 2 The reaction shown occurs at 360°C and 1 atm.



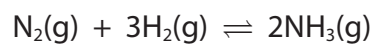
What is the type of equilibrium and how is K_c affected by an **increase** in temperature?

	Type of equilibrium	Effect of increasing temperature on K_c
<input type="checkbox"/> A	heterogeneous	decreases
<input type="checkbox"/> B	homogeneous	decreases
<input type="checkbox"/> C	heterogeneous	increases
<input type="checkbox"/> D	homogeneous	increases

(Total for Question 2 = 1 mark)



3 What are the units of K_p for the equilibrium shown?

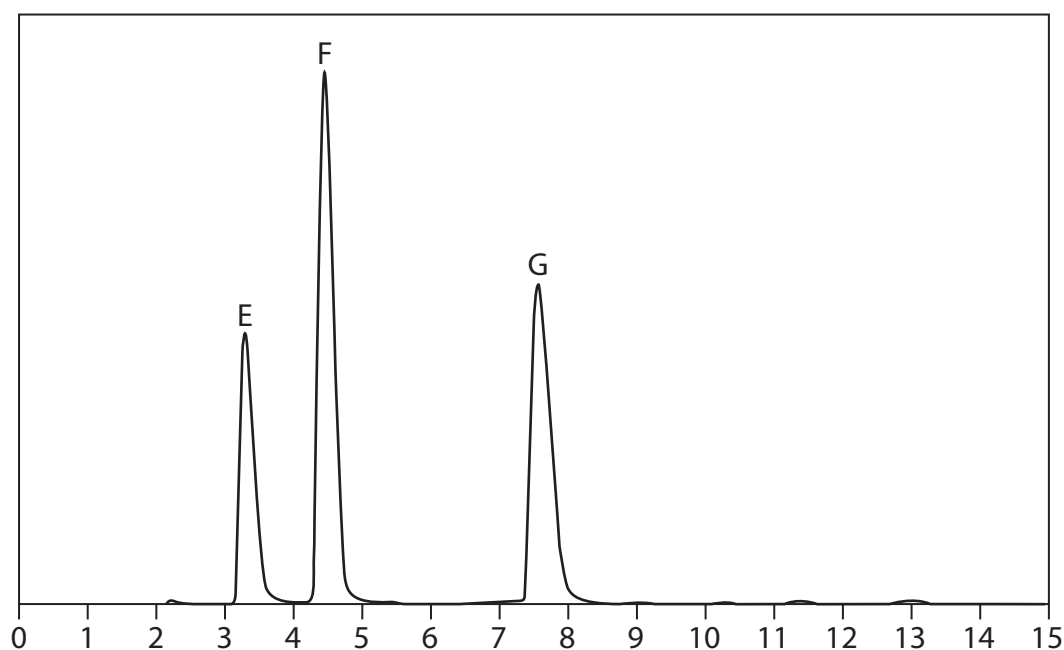


- A atm^{-1}
- B atm
- C atm^{-2}
- D atm^2

(Total for Question 3 = 1 mark)

4 High-performance liquid chromatography (HPLC) is used to separate a mixture into its three components.

The resulting chromatogram is shown.



(a) Which is correct for the labels on the axes?

(1)

	x-axis	y-axis
<input type="checkbox"/> A	absorption	time
<input type="checkbox"/> B	R_f	absorption
<input type="checkbox"/> C	time	R_f
<input type="checkbox"/> D	time	absorption



(b) Which is correct for the components E, F and G ?

(1)

		Most attracted to stationary phase	Most abundant
<input checked="" type="checkbox"/>	A	E	E
<input checked="" type="checkbox"/>	B	G	E
<input checked="" type="checkbox"/>	C	E	F
<input checked="" type="checkbox"/>	D	G	F

(Total for Question 4 = 2 marks)

5 Which pair of compounds can form a racemic mixture when mixed?

- A**
- $$\begin{array}{c} \text{CH}_2\text{OH} \\ | \\ \text{H} - \text{C} - \text{C}_2\text{H}_5 \\ | \quad \backslash \\ \text{HO} \quad \text{---} \end{array}$$

$$\begin{array}{c} \text{CH}_2\text{OH} \\ | \\ \text{H} - \text{C} - \text{CH}_2\text{OH} \\ | \quad \backslash \\ \text{H}_3\text{C} \quad \text{---} \end{array}$$
- B**
- $$\begin{array}{c} \text{CH}_2\text{OH} \\ | \\ \text{H} - \text{C} - \text{C}_2\text{H}_5 \\ | \quad \backslash \\ \text{HO} \quad \text{---} \end{array}$$

$$\begin{array}{c} \text{CH}_2\text{OH} \\ | \\ \text{H} - \text{C} - \text{C}_2\text{H}_5 \\ | \quad \backslash \\ \text{HO} \quad \text{---} \end{array}$$
- C**
- $$\begin{array}{c} \text{CH}_3 \\ | \\ \text{H} - \text{C} - \text{C}_2\text{H}_4\text{OH} \\ | \quad \backslash \\ \text{HO} \quad \text{---} \end{array}$$

$$\begin{array}{c} \text{CH}_3 \\ | \\ \text{HO} - \text{C} - \text{CH}_2\text{OH} \\ | \quad \backslash \\ \text{H}_3\text{C} \quad \text{---} \end{array}$$
- D**
- $$\begin{array}{c} \text{CH}_2\text{OH} \\ | \\ \text{H} - \text{C} - \text{C}_2\text{H}_5 \\ | \quad \backslash \\ \text{HO} \quad \text{---} \end{array}$$

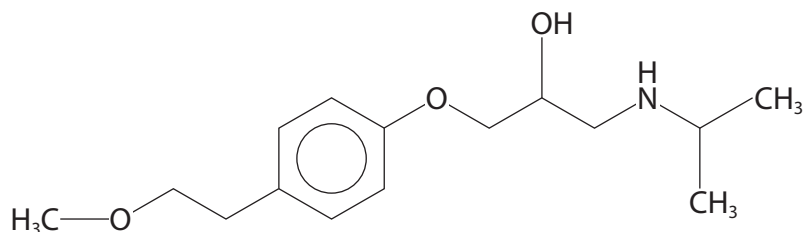
$$\begin{array}{c} \text{CH}_2\text{OH} \\ | \\ \text{H}_5\text{C}_2 - \text{C} - \text{H} \\ | \quad \backslash \\ \quad \quad \text{OH} \end{array}$$

(Total for Question 5 = 1 mark)



6 Metoprolol is a drug used to treat heart problems.

The structure of metoprolol is shown.



How many chiral centres are there in a molecule of metoprolol?

- A 0
- B 1
- C 2
- D 3

(Total for Question 6 = 1 mark)

7 The decomposition of hydrogen peroxide is catalysed by iodide ions.



The mechanism for this reaction is shown.

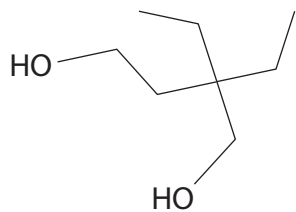


What is the rate equation for this reaction?

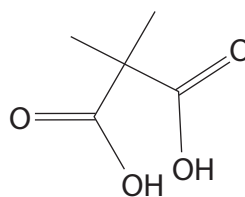
- A rate = $k[\text{H}_2\text{O}_2]^2[\text{I}^-]$
- B rate = $k[\text{H}_2\text{O}_2][\text{I}^-]$
- C rate = $k[\text{H}_2\text{O}_2]^2[\text{I}^-][\text{IO}^-]$
- D rate = $k[\text{H}_2\text{O}_2][\text{IO}^-]$

(Total for Question 7 = 1 mark)

8 The two monomers shown react to form a polymer.

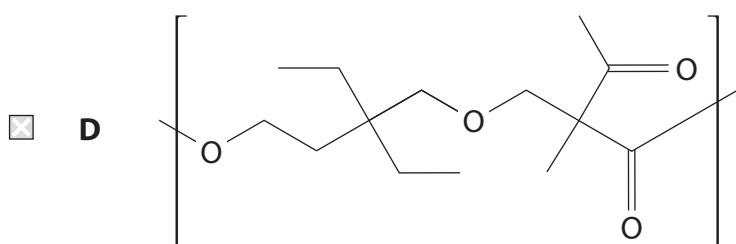
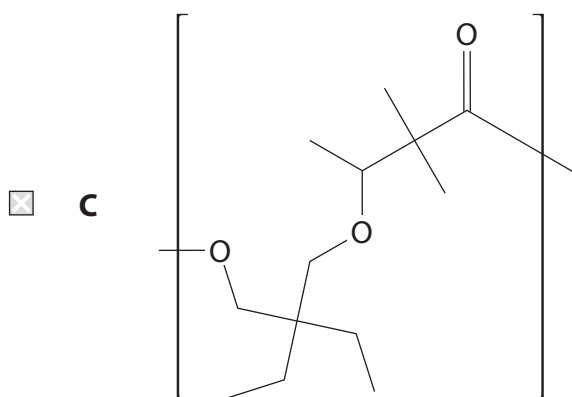
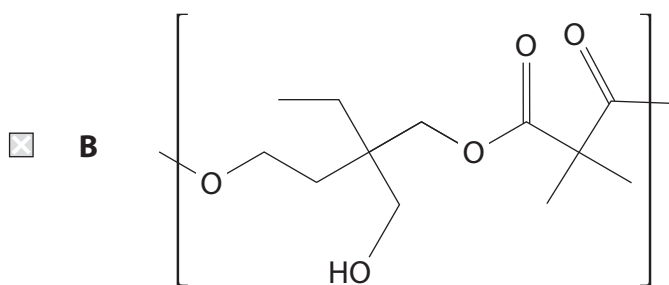
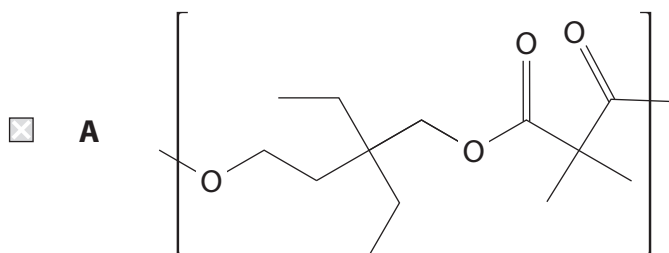


monomer 1



monomer 2

Which is a repeat unit of the resulting polymer?



(Total for Question 8 = 1 mark)

DO NOT WRITE IN THIS AREA

DO NOT WRITE IN THIS AREA

DO NOT WRITE IN THIS AREA

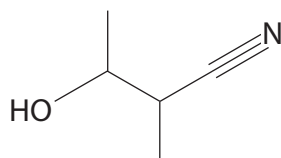


10 How do the boiling temperature and the solubility in water of butanoic acid compare with the values for hexane?

	Boiling temperature	Solubility in water
<input type="checkbox"/> A	lower	lower
<input type="checkbox"/> B	lower	higher
<input type="checkbox"/> C	higher	lower
<input type="checkbox"/> D	higher	higher

(Total for Question 10 = 1 mark)

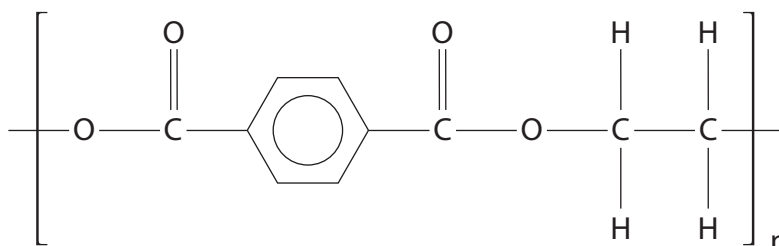
11 Which acid would be produced by the hydrolysis of the molecule shown?



- A 2-hydroxy-3-methylbutanoic acid
- B 3-hydroxy-2-methylbutanoic acid
- C 3-hydroxy-2,3-dimethylpropanoic acid
- D 4-hydroxypentanoic acid

(Total for Question 11 = 1 mark)

12 Which is produced after the polyester shown is hydrolysed with excess sodium hydroxide?

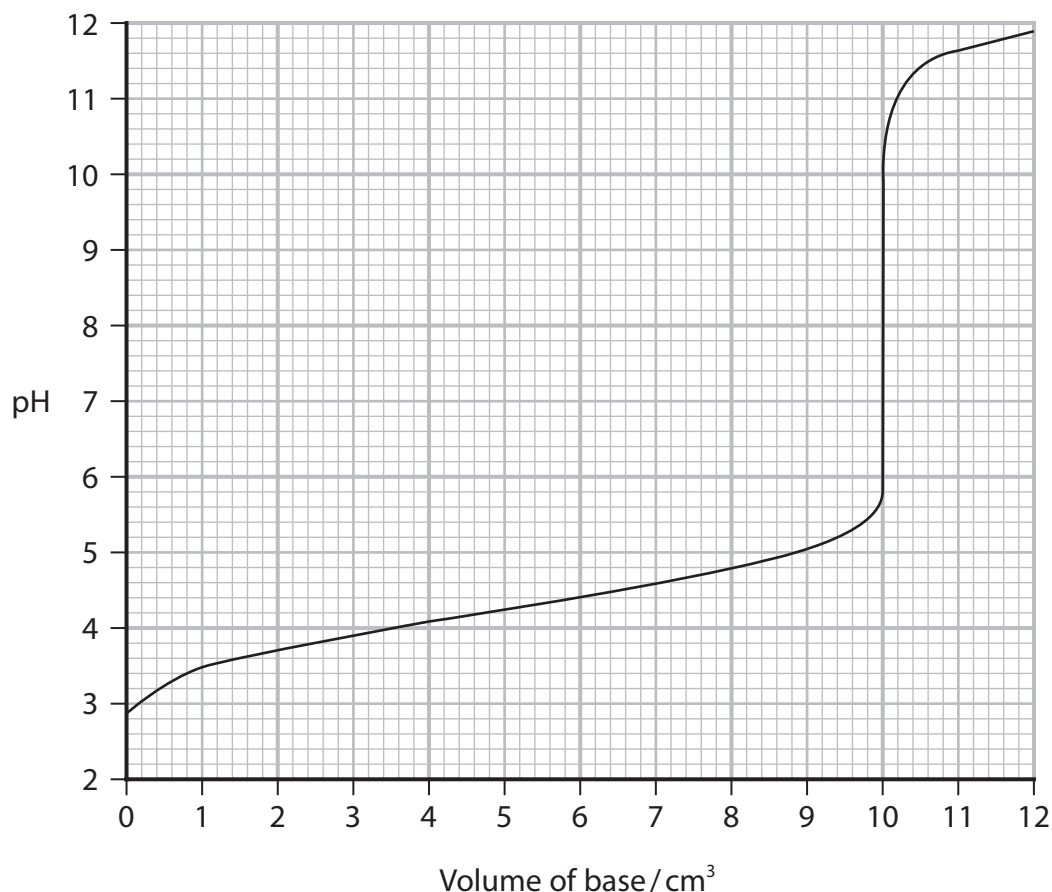


- A benzene-1,4-dicarboxylic acid
- B ethane-1,2-diol
- C sodium ethanedioate
- D water

(Total for Question 12 = 1 mark)



13 The titration curve shown is produced when a base is added to an acid.



(a) Which indicators could be used for this titration? Use your Data Booklet.

(1)

- A bromocresol green, methyl red and phenolphthalein
- B bromothymol blue, phenol red and phenolphthalein
- C methyl red, bromothymol blue and phenol red
- D thymol blue, screened methyl orange and bromophenol blue

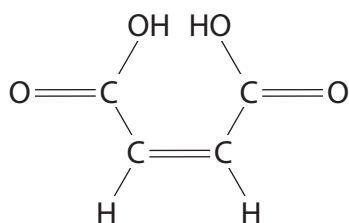
(b) Which acid and base could produce this curve?

(1)

- A CH_3COOH and NaOH
- B CH_3COOH and NH_3
- C HCl and NaOH
- D HCl and NH_3

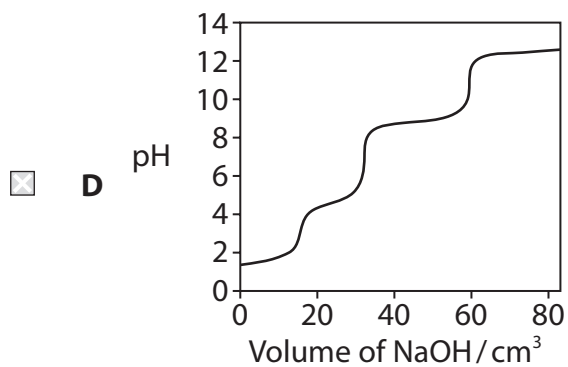
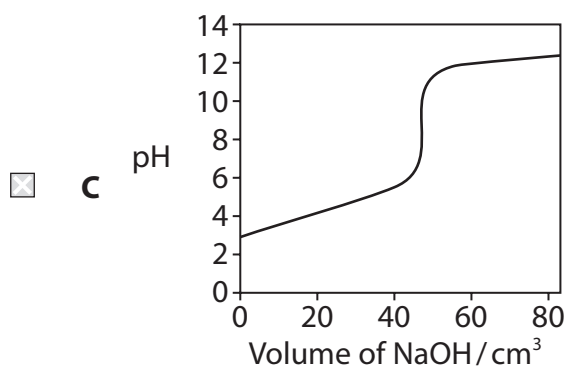
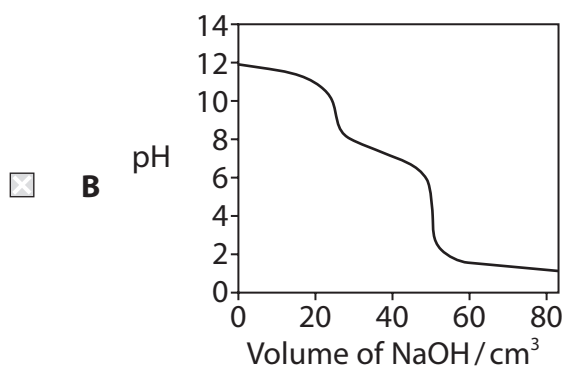
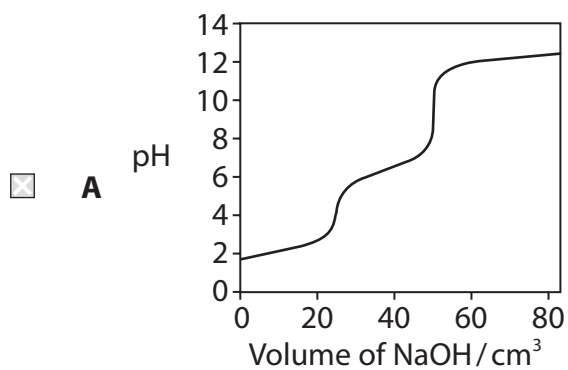
(Total for Question 13 = 2 marks)

14 The structure of maleic acid is shown.



(a) Which could be the titration curve when sodium hydroxide is added to maleic acid?

(1)



DO NOT WRITE IN THIS AREA

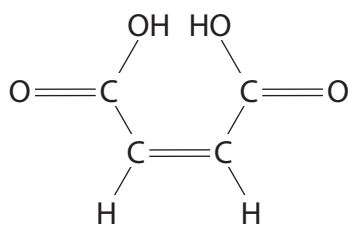
DO NOT WRITE IN THIS AREA

DO NOT WRITE IN THIS AREA



(b) What is the IUPAC name for maleic acid?

(1)



maleic acid

- A (E)-but-2-enedioic acid
- B (Z)-but-2-enedioic acid
- C (E)-1,2-ethenedioic acid
- D (Z)-1,2-ethenedioic acid

(Total for Question 14 = 2 marks)

15 Which is **not** a conjugate acid-base pair?

- A $\text{NH}_3, \text{NH}_2^-$
- B $\text{NH}_4^+, \text{NH}_3$
- C $\text{H}_2\text{CO}_3, \text{CO}_3^{2-}$
- D $\text{H}_2\text{CO}_3, \text{HCO}_3^-$

(Total for Question 15 = 1 mark)

16 What is the pH of the solution when 2.15 g of barium hydroxide is dissolved in 200 cm^3 of deionised water?

[molar mass of barium hydroxide = 171.3 g mol^{-1} $K_w = 1.00 \times 10^{-14} \text{ mol}^2 \text{ dm}^{-6}$]

- A 10.1
- B 12.1
- C 12.8
- D 13.1

(Total for Question 16 = 1 mark)

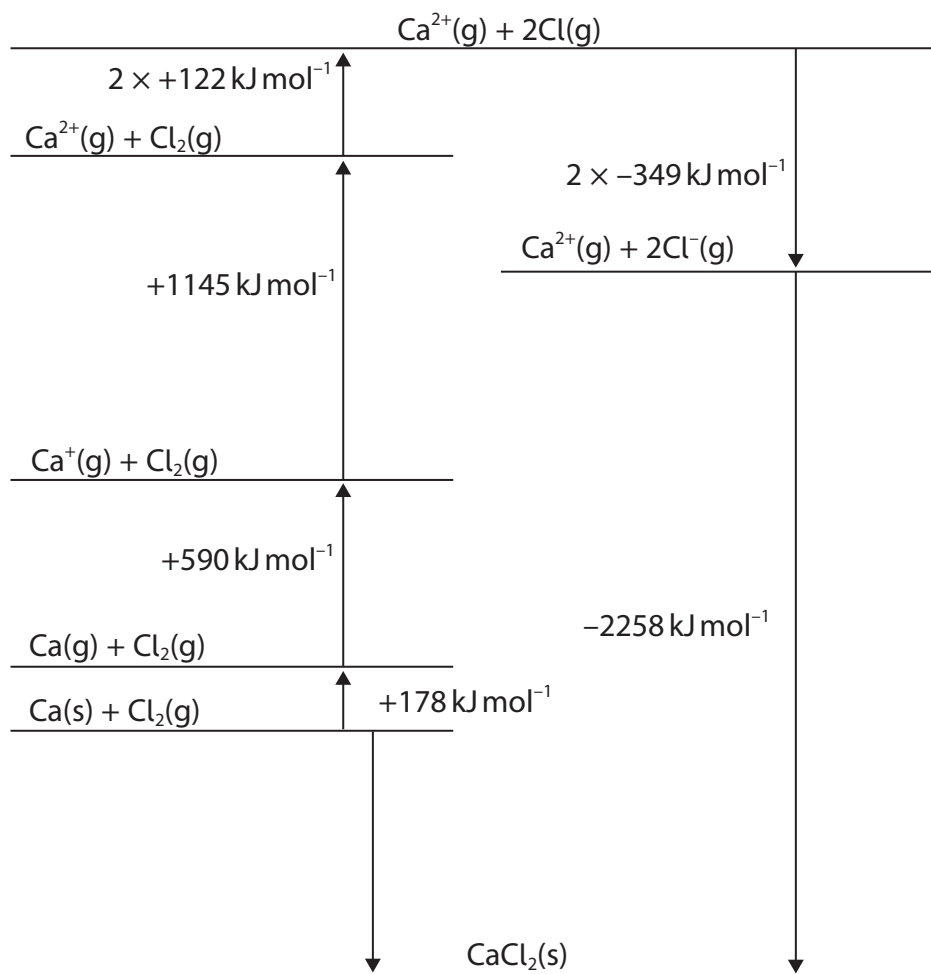
TOTAL FOR SECTION A = 20 MARKS



SECTION B

Answer ALL the questions. Write your answers in the spaces provided.

17 A Born–Haber cycle for calcium chloride is shown.



(a) State the value of the $\Delta_{\text{at}}H$ for calcium.

(1)

(b) Calculate the enthalpy change of formation for calcium chloride.

(2)

DO NOT WRITE IN THIS AREA

DO NOT WRITE IN THIS AREA

DO NOT WRITE IN THIS AREA



(c) Some energy data are shown.

Compound	Theoretical lattice energy / kJ mol^{-1}	Experimental lattice energy / kJ mol^{-1}
CaCl_2	-2223	-2258
CaI_2	-1905	-2074

Explain why the difference between the theoretical and the experimental values for lattice energy is very much greater for calcium iodide than for calcium chloride.

(4)

.....

.....

.....

.....

.....

.....

.....

.....

.....

.....

DO NOT WRITE IN THIS AREA

DO NOT WRITE IN THIS AREA

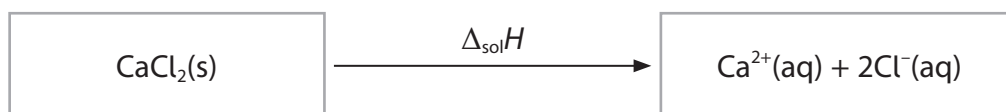
DO NOT WRITE IN THIS AREA



(d) Calcium chloride is soluble in water.

(i) Complete the energy cycle including labelled arrows.

(2)



(ii) Calculate the enthalpy change of solution, $\Delta_{\text{sol}}H$, for calcium chloride using the data given and the completed energy cycle in (d)(i).

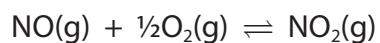
(2)

Data	Energy change / kJ mol^{-1}
LE ($\text{CaCl}_2(\text{s})$)	-2258
$\Delta_{\text{hyd}}H$ ($\text{Ca}^{2+}(\text{g})$)	-1579
$\Delta_{\text{hyd}}H$ ($\text{Cl}^{-}(\text{g})$)	-378

(Total for Question 17 = 11 marks)



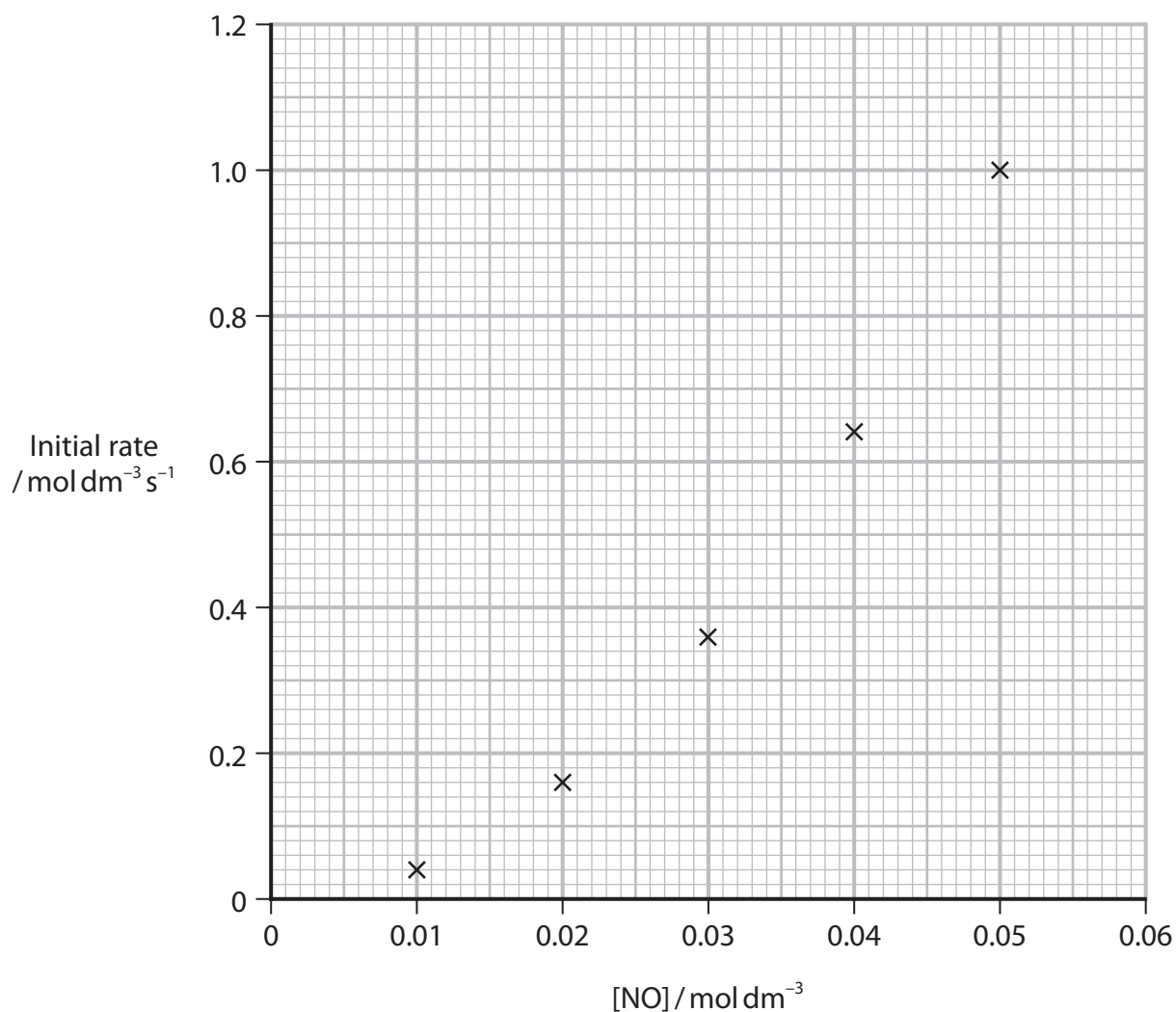
18 This question is about the reaction between nitrogen monoxide and oxygen.



(a) The results of a series of kinetics experiments are shown.

Experiment	Initial [NO] / mol dm ⁻³	Initial [O ₂] / mol dm ⁻³	Initial rate / mol dm ⁻³ s ⁻¹
1	0.010	0.050	0.040
2	0.020	0.050	0.160
3	0.030	0.050	0.360
4	0.040	0.050	0.641
5	0.050	0.050	1.001
6	0.020	0.025	0.080

The data for experiments 1–5 were plotted on a graph.



(i) Draw a best-fit line on the graph.

(1)



(ii) State how the graph shows that the reaction is **not** first order with respect to nitrogen monoxide.

(1)

(iii) Deduce the orders of reaction with respect to NO and O₂, using the data from experiments 1–6.

(2)

Order with respect to NO =

Order with respect to O₂ =

(iv) Write the rate equation for the reaction, using your answer to (a)(iii).

(1)

(v) Calculate the rate constant for this reaction using the data from experiment 1 and your rate equation. Include units in your answer.

(2)

(b) The equilibrium constant, K_p , for the reaction at 298 K is $1.55 \times 10^6 \text{ atm}^{-1/2}$.

State what this value of the equilibrium constant indicates about the position of the equilibrium. Justify your answer.

(2)

(Total for Question 18 = 9 marks)



DO NOT WRITE IN THIS AREA

DO NOT WRITE IN THIS AREA

DO NOT WRITE IN THIS AREA

19 This question is about some bromoalkanes.

(a) There are three straight-chain structural isomers with the molecular formula $C_5H_{11}Br$.

(i) Complete the table for these three isomers.

(3)

Isomer	Skeletal formula	Number of peaks in ^{13}C NMR spectrum
1	
2	
3	



DO NOT WRITE IN THIS AREA

DO NOT WRITE IN THIS AREA

DO NOT WRITE IN THIS AREA

Handwriting practice area with 20 horizontal dotted lines.



P 7 1 9 4 2 A 0 1 9 3 2

(b) Draw the S_N2 mechanism for the reaction of 1-bromopropane with hydroxide ions in aqueous solution.

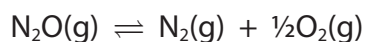
Include curly arrows, and relevant dipoles and lone pairs.

(4)

(Total for Question 19 = 13 marks)



20 Nitrous oxide, N_2O , decomposes at high temperature to form nitrogen and oxygen.



(a) (i) Some standard molecular entropy data are shown.

Substance	Standard molecular entropy S^\ominus / $\text{JK}^{-1}\text{mol}^{-1}$
nitrogen, N_2	192
oxygen, O_2	205
nitrous oxide, N_2O	220

Calculate the standard entropy change of the system for the decomposition shown.

Include a sign and units in your answer.

(2)

(ii) The standard enthalpy change of the forward reaction is -82 kJ mol^{-1} .

Calculate the entropy change of the surroundings at 2048 K.

Include a sign and units in your answer.

(2)

(iii) Calculate the total entropy change of the reaction at 2048 K.

Include a sign and units in your answer.

(1)

DO NOT WRITE IN THIS AREA

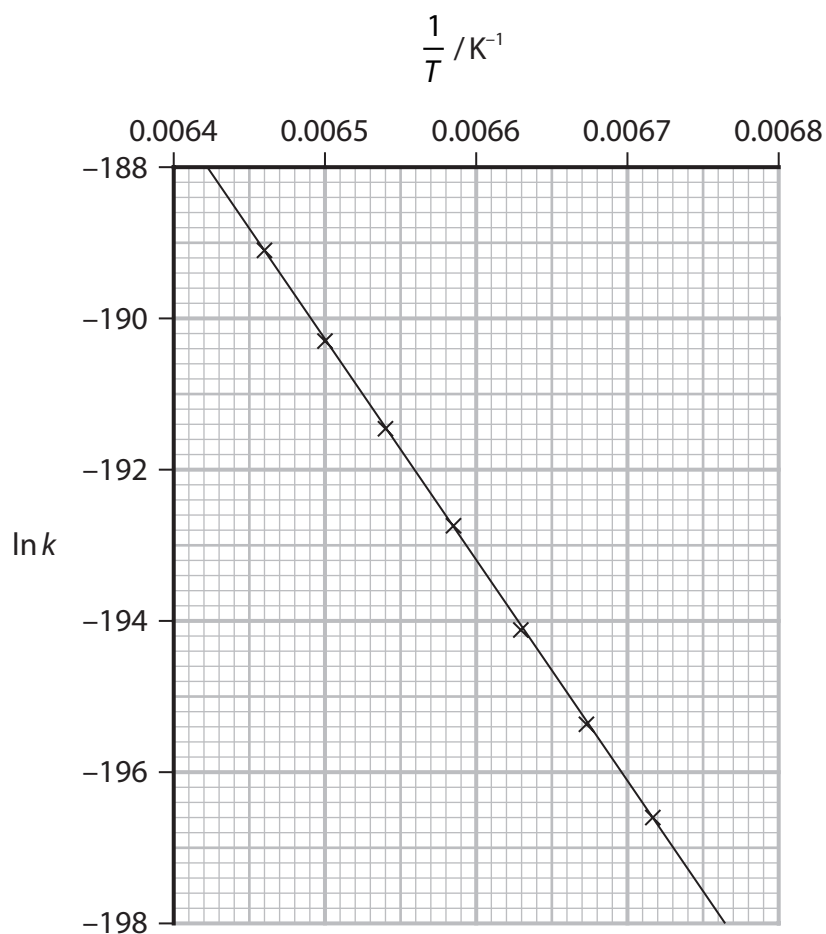
DO NOT WRITE IN THIS AREA

DO NOT WRITE IN THIS AREA



P 7 1 9 4 2 A 0 2 1 3 2

(b) Rate experiments on the decomposition of nitrous oxide produced the following graph.



Calculate the activation energy for the reaction in kJ mol^{-1} .
Include the value of the gradient.

$$\ln k = -\frac{E_a}{R} \frac{1}{T} + \text{constant}$$

$$R = 8.31 \text{ J K}^{-1} \text{ mol}^{-1}$$

(2)



(c) Explain whether or not this reaction occurs at 2048 K by considering the values calculated in (a) and (b).

(2)

.....

.....

.....

.....

(Total for Question 20 = 9 marks)

DO NOT WRITE IN THIS AREA

DO NOT WRITE IN THIS AREA

DO NOT WRITE IN THIS AREA



P 7 1 9 4 2 A 0 2 3 3 2

21 Hexane-2,5-dione, $\text{CH}_3\text{COCH}_2\text{CH}_2\text{COCH}_3$, is a toxic compound formed in the human body if hexane is consumed.

(a) Complete the table for hexane-2,5-dione.

Name the organic product formed if a reaction takes place.

(2)

Reagent and conditions	Reaction (✓ / ✗)	Name of organic product (if formed)
refluxed with excess acidified potassium dichromate(VI)		
excess lithium tetrahydridoaluminate(III) in dry ether		

(b) State the observation when hexane-2,5-dione reacts with iodine in the presence of alkali.

(1)

(c) Hexane-2,5-dione reacts with **excess** hydrogen cyanide, HCN, in the presence of potassium cyanide, KCN.

(i) Name the type and mechanism of this reaction.

(1)

(ii) Draw the structure of the product.

(1)



DO NOT WRITE IN THIS AREA

DO NOT WRITE IN THIS AREA

DO NOT WRITE IN THIS AREA

(d) (i) Give the observation when 2,4-dinitrophenylhydrazine (Brady's reagent) reacts with hexane-2,5-dione.

(1)

(ii) Describe, in outline, how the product of this reaction may be used to confirm the identity of hexane-2,5-dione. Experimental details are not required.

(2)

(Total for Question 21 = 8 marks)

TOTAL FOR SECTION B = 50 MARKS

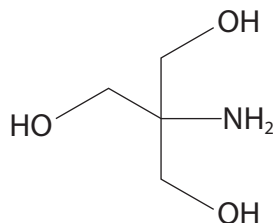


P 7 1 9 4 2 A 0 2 5 3 2

SECTION C

Answer ALL the questions. Write your answers in the spaces provided.

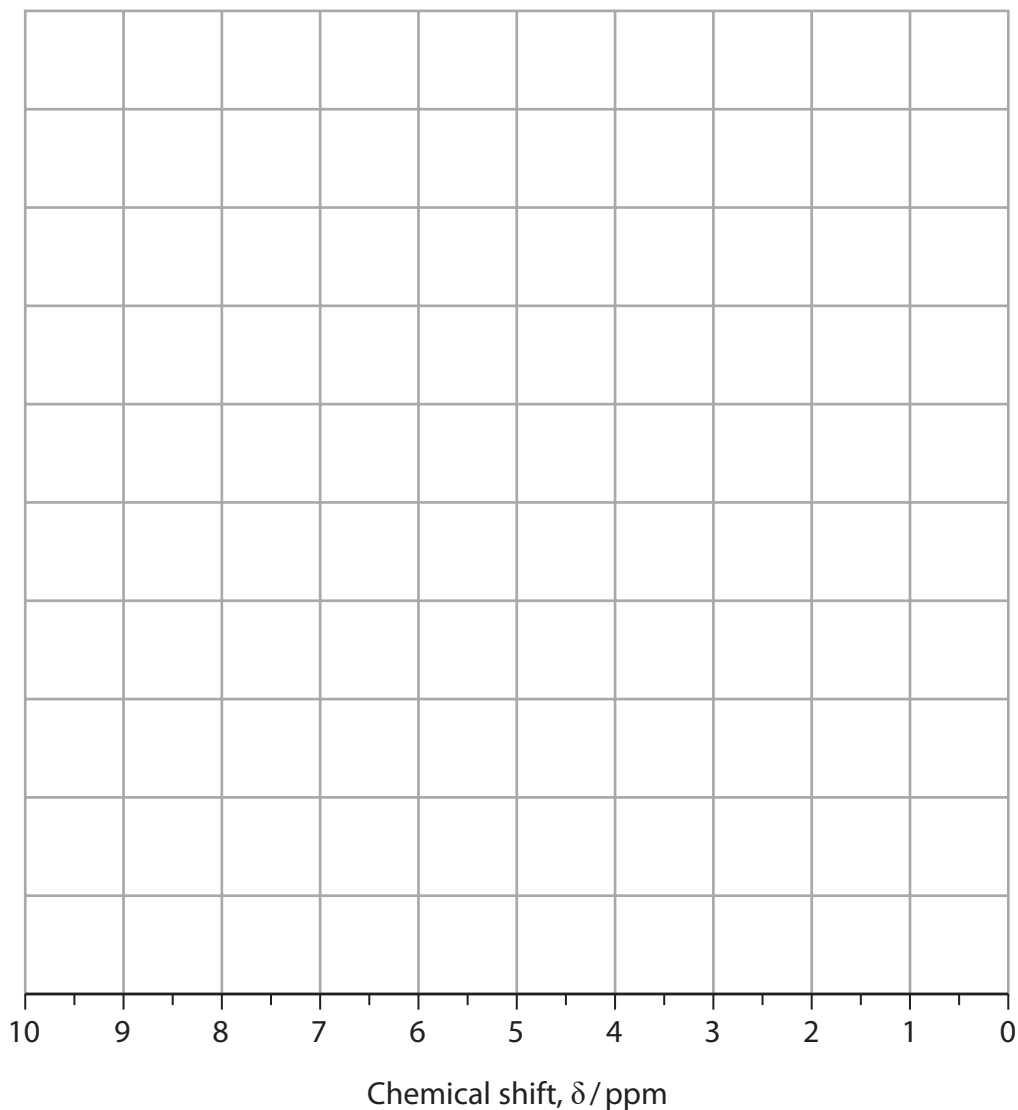
- 22 The alkaline compound tris(hydroxymethyl)aminomethane, known as Tris, is used to make a buffer for biological research.



Tris

- (a) Sketch the **low** resolution proton NMR spectrum of Tris ($C_4H_{11}NO_3$).
Use your Data Booklet.

(3)



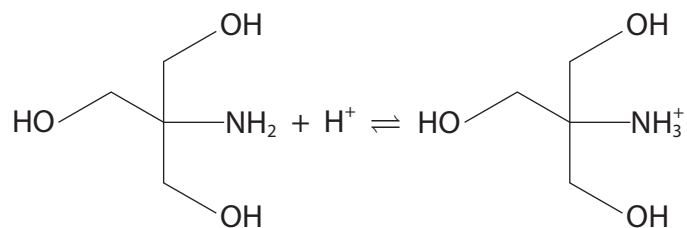
DO NOT WRITE IN THIS AREA

DO NOT WRITE IN THIS AREA

DO NOT WRITE IN THIS AREA



(b) Tris is a Brønsted–Lowry base and its conjugate acid is formed as shown.



- (i) Explain how a mixture of Tris and its conjugate acid acts as a buffer solution when a small amount of acid is added.

(3)

.....

.....

.....

.....

.....

.....

.....

.....



P 7 1 9 4 2 A 0 2 7 3 2

(ii) Write the expression for the K_a of the conjugate acid of Tris ($C_4H_{12}NO_3^+$).

(1)

(iii) When hydrochloric acid is added to Tris, the acid salt is formed.

The acid salt is a solid, which has the formula $C_4H_{12}NO_3^+Cl^-$, and contains the conjugate acid of Tris.

When 100 g of the acid salt is mixed with 500 cm^3 of 0.200 mol dm^{-3} Tris, an alkaline buffer is formed.

Calculate the pH of this buffer, assuming that there is no change in volume when the solid is added.

K_a for the conjugate acid of Tris is $8.413 \times 10^{-9}\text{ mol dm}^{-3}$.

(5)

DO NOT WRITE IN THIS AREA

DO NOT WRITE IN THIS AREA

DO NOT WRITE IN THIS AREA



DO NOT WRITE IN THIS AREA

DO NOT WRITE IN THIS AREA

DO NOT WRITE IN THIS AREA

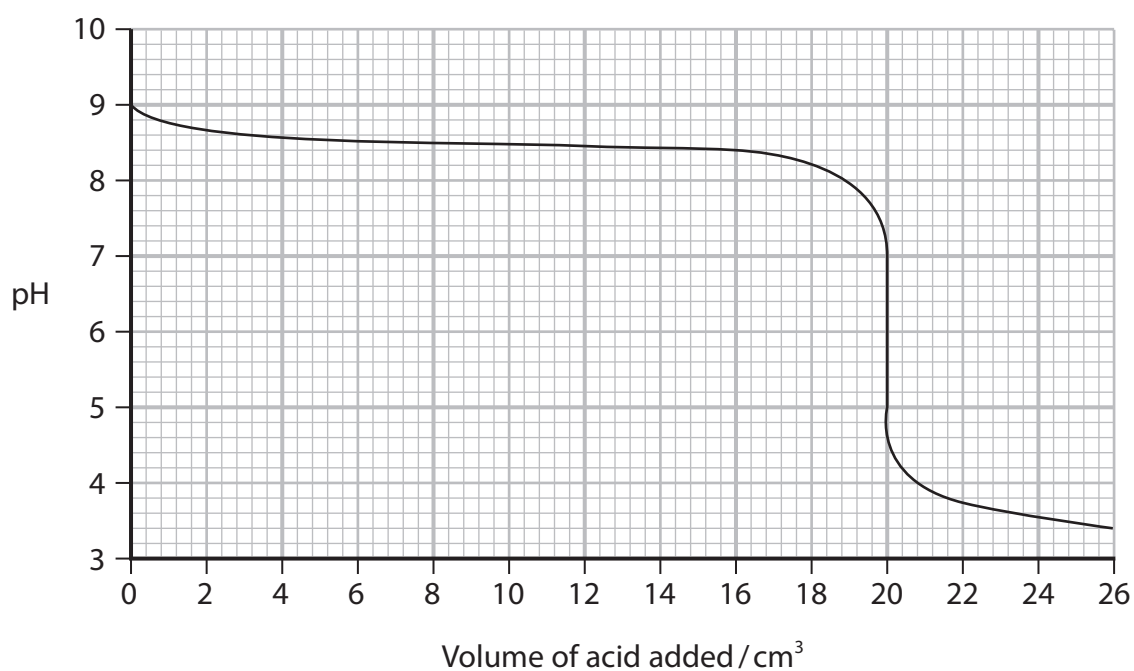
(c) A solution of chloroethanoic acid is prepared for titration with Tris.

0.0150 g of chloroethanoic acid ($M_r = 94.5$) is dissolved in 1500 cm^3 of distilled water. The resulting solution has a pH of 3.42.

Calculate the K_a of chloroethanoic acid.

(4)

(d) A titration curve of Tris with chloroethanoic acid is shown.



P 7 1 9 4 2 A 0 2 9 3 2

(i) Explain how this graph shows Tris and its conjugate acid act as a buffer.

(2)

.....

.....

.....

.....

.....

.....

(ii) Use the graph to estimate the pH of the salt formed when Tris is neutralised with chloroethanoic acid.

(1)

.....

(iii) Suggest a reason why buffers are so important in biological systems.

(1)

.....

.....

.....

.....

.....

.....

(Total for Question 22 = 20 marks)

TOTAL FOR SECTION C = 20 MARKS

TOTAL FOR PAPER = 90 MARKS



DO NOT WRITE IN THIS AREA

DO NOT WRITE IN THIS AREA

DO NOT WRITE IN THIS AREA

BLANK PAGE



P 7 1 9 4 2 A 0 3 1 3 2

The Periodic Table of Elements

1 2 3 4 5 6 7 0 (8)
(18)

1.0	H	hydrogen	1
-----	----------	----------	---

Key

relative atomic mass
atomic symbol
name
atomic (proton) number

(1)	(2)	(3)	(4)	(5)	(6)	(7)	(8)	(9)	(10)	(11)	(12)	(13)	(14)	(15)	(16)	(17)	(18)	
6.9 Li lithium 3	9.0 Be beryllium 4	45.0 Sc scandium 21	47.9 Ti titanium 22	50.9 V vanadium 23	52.0 Cr chromium 24	54.9 Mn manganese 25	55.8 Fe iron 26	58.9 Co cobalt 27	58.7 Ni nickel 28	63.5 Cu copper 29	65.4 Zn zinc 30	10.8 B boron 5	12.0 C carbon 6	14.0 N nitrogen 7	16.0 O oxygen 8	19.0 F fluorine 9	4.0 He helium 2	
23.0 Na sodium 11	24.3 Mg magnesium 12	88.9 Y yttrium 39	91.2 Zr zirconium 40	92.9 Nb niobium 41	95.9 Mo molybdenum 42	[98] Tc technetium 43	101.1 Ru ruthenium 44	102.9 Rh rhodium 45	106.4 Pd palladium 46	107.9 Ag silver 47	112.4 Cd cadmium 48	27.0 Al aluminium 13	28.1 Si silicon 14	31.0 P phosphorus 15	32.1 S sulfur 16	35.5 Cl chlorine 17	39.9 Ar argon 18	
39.1 K potassium 19	40.1 Ca calcium 20	87.6 Sr strontium 38	91.2 Zr zirconium 40	92.9 Nb niobium 41	95.9 Mo molybdenum 42	186.2 Re rhenium 75	190.2 Os osmium 76	192.2 Ir iridium 77	195.1 Pt platinum 78	197.0 Au gold 79	200.6 Hg mercury 80	69.7 Ga gallium 31	72.6 Ge germanium 32	74.9 As arsenic 33	79.0 Se selenium 34	79.9 Br bromine 35	83.8 Kr krypton 36	
132.9 Cs caesium 55	137.3 Ba barium 56	138.9 La* lanthanum 57	178.5 Hf hafnium 72	180.9 Ta tantalum 73	183.8 W tungsten 74	186.2 Re rhenium 75	190.2 Os osmium 76	192.2 Ir iridium 77	195.1 Pt platinum 78	197.0 Au gold 79	200.6 Hg mercury 80	114.8 In indium 49	118.7 Sn tin 50	121.8 Sb antimony 51	127.6 Te tellurium 52	126.9 I iodine 53	131.3 Xe xenon 54	
[223] Fr francium 87	[226] Ra radium 88	[227] Ac* actinium 89	[261] Rf rutherfordium 104	[262] Db dubnium 105	[266] Sg seaborgium 106	[264] Bh bohrium 107	[277] Hs hassium 108	[271] Ds darmstadtium 110	[272] Rg roentgenium 111	Elements with atomic numbers 112-116 have been reported but not fully authenticated								

* Lanthanide series

* Actinide series

140 Ce cerium 58	141 Pr praseodymium 59	144 Nd neodymium 60	[147] Pm promethium 61	150 Sm samarium 62	152 Eu europium 63	157 Gd gadolinium 64	163 Dy dysprosium 66	165 Ho holmium 67	167 Er erbium 68	169 Tm thulium 69	173 Yb ytterbium 70	175 Lu lutetium 71
232 Th thorium 90	[231] Pa protactinium 91	238 U uranium 92	[237] Np neptunium 93	[242] Pu plutonium 94	[243] Am americium 95	[247] Cm curium 96	[251] Cf californium 98	[254] Es einsteinium 99	[253] Fm fermium 100	[256] Md mendelevium 101	[254] No nobelium 102	[257] Lr lawrencium 103

DO NOT WRITE IN THIS AREA

DO NOT WRITE IN THIS AREA

DO NOT WRITE IN THIS AREA

