



Cambridge International Examinations
Cambridge International General Certificate of Secondary Education

CANDIDATE
NAME

CENTRE
NUMBER

--	--	--	--	--

CANDIDATE
NUMBER

--	--	--	--

* 4 4 0 1 7 0 1 6 2 9 *

CHEMISTRY

0620/42

Paper 4 Theory (Extended)

October/November 2018

1 hour 15 minutes

Candidates answer on the Question Paper.

No Additional Materials are required.

READ THESE INSTRUCTIONS FIRST

Write your Centre number, candidate number and name on all the work you hand in.

Write in dark blue or black pen.

You may use an HB pencil for any diagrams or graphs.

Do not use staples, paper clips, glue or correction fluid.

DO **NOT** WRITE IN ANY BARCODES.

Answer **all** questions.

Electronic calculators may be used.

A copy of the Periodic Table is printed on page 16.

You may lose marks if you do not show your working or if you do not use appropriate units.

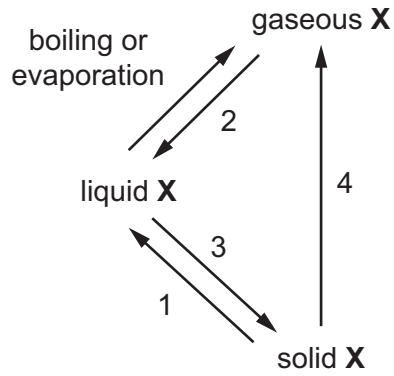
At the end of the examination, fasten all your work securely together.

The number of marks is given in brackets [] at the end of each question or part question.

The syllabus is approved for use in England, Wales and Northern Ireland as a Cambridge International Level 1/Level 2 Certificate.

This document consists of **13** printed pages and **3** blank pages.

1 Element X can undergo the following physical changes.



(a) (i) Give the scientific name for each of the numbered physical changes.

- 1
- 2
- 3
- 4 [4]

(ii) Explain why the changes shown are physical changes.

..... [1]

(iii) One difference between boiling and evaporation is the rate at which the processes occur. State **one** other difference between boiling and evaporation.

..... [1]

(b) Describe the separation, arrangement and motion of particles of element X in the solid state.

separation

arrangement

motion [3]

(c) Element X is a Group I metal. It burns in air to form an oxide X_2O .

Write a chemical equation for this reaction.

..... [2]

[Total: 11]

2 Magnesium, calcium and strontium are Group II elements.

(a) Complete the table to show the arrangement of electrons in a calcium atom.

shell number	1	2	3	4
number of electrons				

[1]

(b) Describe how the arrangement of electrons in a strontium atom is:

(i) similar to the arrangement of electrons in a calcium atom

.....

(ii) different from the arrangement of electrons in a calcium atom.

.....

[2]

(c) Calcium reacts with cold water to form two products:

- a colourless gas, **P**, which 'pops' with a lighted splint
- a weakly alkaline solution, **Q**, which turns milky when carbon dioxide is bubbled through it.

(i) Name gas **P**.

..... [1]

(ii) Identify the ion responsible for making solution **Q** alkaline.

..... [1]

(iii) Suggest the pH of solution **Q**.

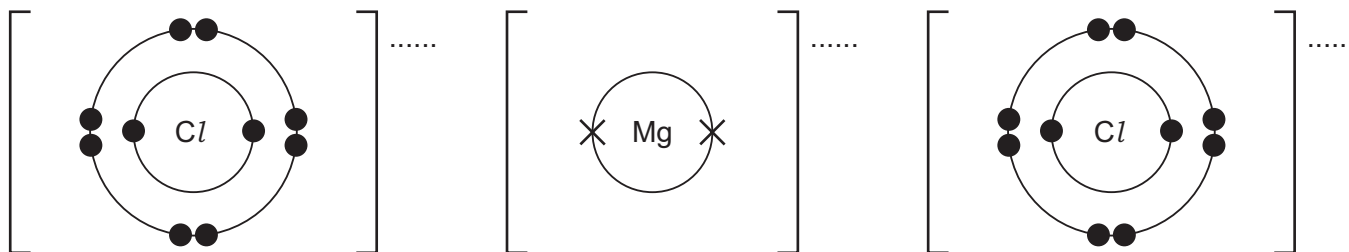
..... [1]

(iv) Write a chemical equation for the reaction of calcium with cold water.

..... [2]

(d) Magnesium reacts with chlorine to form magnesium chloride, MgCl_2 . Magnesium chloride is an ionic compound.

(i) Complete the diagrams to show the electronic structures of the ions in magnesium chloride. Show the charges on the ions.



[3]

(ii) Give **three** physical properties that are typical of ionic compounds such as MgCl_2 .

1

2

3

[3]

(e) Aqueous magnesium chloride is added to aqueous silver nitrate. A white precipitate forms.

Write an **ionic** equation for this reaction. Include state symbols.

..... [2]

[Total: 16]

3 Sulfur is an important element.

(a) Explain how burning fossil fuels containing sulfur leads to the formation of acid rain.

.....

 [2]

(b) Sulfuric acid is manufactured by the Contact process. One step in the Contact process involves a reversible reaction in which sulfur trioxide, SO_3 , is formed.

(i) Write a chemical equation for this reversible reaction. Include the correct symbol to show that the reaction is reversible.

..... [2]

(ii) State the conditions and name the catalyst used in this reversible reaction.

temperature

pressure

catalyst

[3]

(iii) Describe how the sulfur trioxide formed is converted into sulfuric acid in the next steps of the Contact process.

.....

 [2]

(c) Dilute sulfuric acid is used to make salts known as sulfates.

A method consisting of three steps is used to make zinc sulfate from zinc carbonate.

step 1 Add an excess of zinc carbonate to 20 cm³ of 0.4 mol/dm³ dilute sulfuric acid until the reaction is complete.

step 2 Filter the mixture.

step 3 Heat the filtrate until a saturated solution forms and then allow it to crystallise.

(i) Name a suitable piece of apparatus for measuring 20 cm³ of dilute sulfuric acid in **step 1**.

..... [1]

(ii) State **two** observations which would show that the reaction is complete in **step 1**.

1

2

[2]

(iii) Why is it important to add an excess of zinc carbonate in **step 1**?

..... [1]

(iv) What is meant by the term *saturated solution* in **step 3**?

.....

..... [2]

(v) The equation for the reaction is shown.



Complete the equation by inserting the state symbol for zinc sulfate. [1]

(vi) Name another zinc compound which could be used to make zinc sulfate from dilute sulfuric acid using this method.

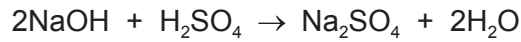
..... [1]

(vii) Suggest why this method would **not** work to make barium sulfate from barium carbonate and dilute sulfuric acid.

..... [1]

- (d) In a titration, a student added 25.0 cm³ of 0.200 mol/dm³ aqueous sodium hydroxide to a conical flask. The student then added a few drops of methyl orange to the solution in the conical flask.

Dilute sulfuric acid was then added from a burette to the conical flask. The volume of dilute sulfuric acid needed to neutralise the aqueous sodium hydroxide was 20.0 cm³.



- (i) What was the colour of the methyl orange in the aqueous sodium hydroxide?

..... [1]

- (ii) Determine the concentration of the dilute sulfuric acid in g/dm³.

- Calculate the number of moles of aqueous sodium hydroxide added to the conical flask.

..... mol

- Calculate the number of moles of dilute sulfuric acid added from the burette.

..... mol

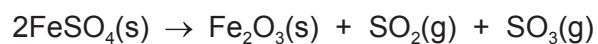
- Calculate the concentration of the dilute sulfuric acid in mol/dm³.

..... mol/dm³

- Calculate the concentration of the dilute sulfuric acid in g/dm³.

..... g/dm³
[4]

(e) Iron(II) sulfate decomposes when heated strongly.



15.20 g of $\text{FeSO}_4(\text{s})$ was heated and formed 4.80 g of $\text{Fe}_2\text{O}_3(\text{s})$.

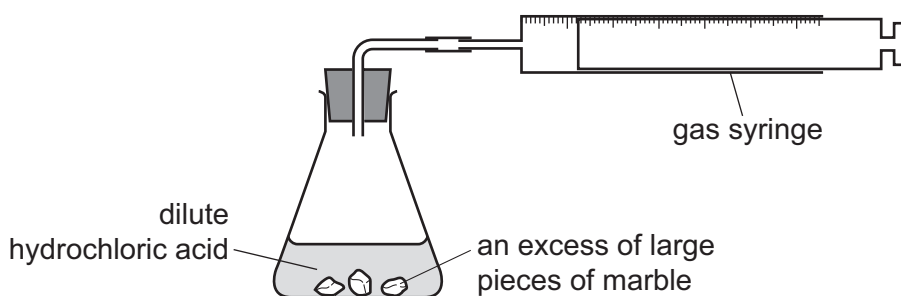
[M_r , $\text{FeSO}_4 = 152$; M_r , $\text{Fe}_2\text{O}_3 = 160$]

Calculate the percentage yield for this reaction.

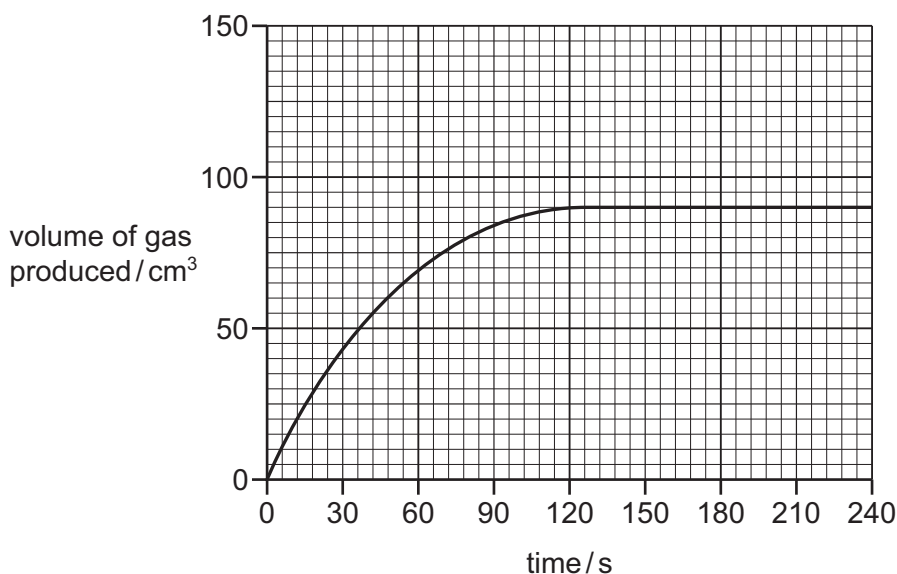
..... % [3]

[Total: 26]

- 4 A student investigated the progress of the reaction between dilute hydrochloric acid, HCl , and an excess of large pieces of marble, CaCO_3 , using the apparatus shown.



- (a) A graph of the volume of gas produced against time is shown.



- (i) How does the shape of the graph show that the rate of reaction decreased as the reaction progressed?

.....
 [1]

- (ii) Why did the rate of reaction decrease as the reaction progressed?

..... [1]

- (iii) After how many seconds did the reaction finish?

..... s [1]

- (b) The experiment was repeated using the same mass of smaller pieces of marble. All other conditions were kept the same.

Draw a graph **on the grid** to show the progress of the reaction using the smaller pieces of marble. [2]

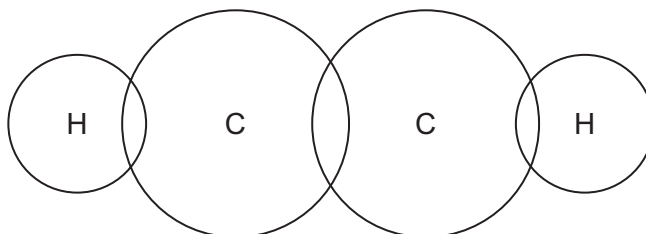
- 5 Alkynes are a homologous series of unsaturated hydrocarbons. All members contain a $C\equiv C$ triple bond.

(a) Complete the table showing information about the first **three** alkynes.

formula	C_2H_2	C_3H_4	
structure	$H-C\equiv C-H$	$H-C\equiv C-CH_3$	$H-C\equiv C-CH_2-CH_3$
name	ethyne		butyne

[2]

- (b) Complete the dot-and-cross diagram to show the electron arrangement in a molecule of ethyne, $H-C\equiv C-H$. Show outer shell electrons only.



[2]

(c) Compounds in the same homologous series have the same general formula.

- (i) Give **two** other characteristics of members of a homologous series.

1

2

[2]

- (ii) Use the information in the table in (a) to deduce the general formula of alkynes.

..... [1]

(d) Alkynes are unsaturated.

Describe a test for unsaturation.

test

result

[2]

BLANK PAGE

Permission to reproduce items where third-party owned material protected by copyright is included has been sought and cleared where possible. Every reasonable effort has been made by the publisher (UCLES) to trace copyright holders, but if any items requiring clearance have unwittingly been included, the publisher will be pleased to make amends at the earliest possible opportunity.

To avoid the issue of disclosure of answer-related information to candidates, all copyright acknowledgements are reproduced online in the Cambridge International Examinations Copyright Acknowledgements Booklet. This is produced for each series of examinations and is freely available to download at www.cie.org.uk after the live examination series.

Cambridge International Examinations is part of the Cambridge Assessment Group. Cambridge Assessment is the brand name of University of Cambridge Local Examinations Syndicate (UCLES), which is itself a department of the University of Cambridge.

The Periodic Table of Elements

		Group																																																																																																																																																																																																																																																																																																																																																																																																																																																																																																																																																																																																																																																																																																																																																																																																																																																																																																																																																																																																																					
I	II	III	IV	V	VI	VII	VIII																																																																																																																																																																																																																																																																																																																																																																																																																																																																																																																																																																																																																																																																																																																																																																																																																																																																																																																																																																																																																
1	2	3	4	5	6	7	8	9	10	11	12	13	14	15	16	17	18																																																																																																																																																																																																																																																																																																																																																																																																																																																																																																																																																																																																																																																																																																																																																																																																																																																																																																																																																																																																						
Li lithium 7	Be beryllium 9	B boron 11	C carbon 12	N nitrogen 14	O oxygen 16	F fluorine 19	Ne neon 20	Na sodium 23	Mg magnesium 24	Al aluminium 27	Si silicon 28	P phosphorus 31	S sulfur 32	Cl chlorine 35.5	Ar argon 40	K potassium 39	Ca calcium 40	Sc scandium 45	Ti titanium 48	V vanadium 51	Cr chromium 52	Mn manganese 55	Fe iron 56	Co cobalt 59	Ni nickel 59	Cu copper 64	Zn zinc 65	Ga gallium 70	Ge germanium 73	As arsenic 75	Se selenium 79	Br bromine 80	Kr krypton 84	Rb rubidium 85	Sr strontium 88	Y yttrium 89	Zr zirconium 91	Nb niobium 93	Mo molybdenum 96	Tc technetium —	Ru ruthenium 101	Rh rhodium 103	Pd palladium 106	Ag silver 108	Cd cadmium 112	In indium 115	Sn tin 119	Sb antimony 122	Te tellurium 128	I iodine 127	Xe xenon 131	Cs caesium 133	Ba barium 137	La lanthanum 139	Hf hafnium 178	Ta tantalum 181	W tungsten 184	Re rhenium 186	Os osmium 190	Ir iridium 192	Pt platinum 195	Au gold 197	Hg mercury 201	Tl thallium 204	Pb lead 207	Bi bismuth 209	Po polonium —	At astatine —	Rn radon —	Fr francium —	Ra radium —	Ac actinium —	Rf rutherfordium —	Db dubnium —	Sg seaborgium —	Bh bohrium —	Hs hassium —	Mt meitnerium —	Ds darmstadtium —	Rg roentgenium —	Cn copernicium —	Fl flerovium —	Lv livermorium —	Uu ununoctium —	Og oganeson —																																																																																																																																																																																																																																																																																																																																																																																																																																																																																																																																																																																																																																																																																																																																																																																																																																																																																																																																		
3	4	5	6	7	8	9	10	11	12	13	14	15	16	17	18	19	20	21	22	23	24	25	26	27	28	29	30	31	32	33	34	35	36	37	38	39	40	41	42	43	44	45	46	47	48	49	50	51	52	53	54	55	56	57–71	72	73	74	75	76	77	78	79	80	81	82	83	84	85	86	87	88	89	90	91	92	93	94	95	96	97	98	99	100	101	102	103	104	105	106	107	108	109	110	111	112	113	114	115	116	117	118	119	120	121	122	123	124	125	126	127	128	129	130	131	132	133	134	135	136	137	138	139	140	141	142	143	144	145	146	147	148	149	150	151	152	153	154	155	156	157	158	159	160	161	162	163	164	165	166	167	168	169	170	171	172	173	174	175	176	177	178	179	180	181	182	183	184	185	186	187	188	189	190	191	192	193	194	195	196	197	198	199	200	201	202	203	204	205	206	207	208	209	210	211	212	213	214	215	216	217	218	219	220	221	222	223	224	225	226	227	228	229	230	231	232	233	234	235	236	237	238	239	240	241	242	243	244	245	246	247	248	249	250	251	252	253	254	255	256	257	258	259	260	261	262	263	264	265	266	267	268	269	270	271	272	273	274	275	276	277	278	279	280	281	282	283	284	285	286	287	288	289	290	291	292	293	294	295	296	297	298	299	300	301	302	303	304	305	306	307	308	309	310	311	312	313	314	315	316	317	318	319	320	321	322	323	324	325	326	327	328	329	330	331	332	333	334	335	336	337	338	339	340	341	342	343	344	345	346	347	348	349	350	351	352	353	354	355	356	357	358	359	360	361	362	363	364	365	366	367	368	369	370	371	372	373	374	375	376	377	378	379	380	381	382	383	384	385	386	387	388	389	390	391	392	393	394	395	396	397	398	399	400	401	402	403	404	405	406	407	408	409	410	411	412	413	414	415	416	417	418	419	420	421	422	423	424	425	426	427	428	429	430	431	432	433	434	435	436	437	438	439	440	441	442	443	444	445	446	447	448	449	450	451	452	453	454	455	456	457	458	459	460	461	462	463	464	465	466	467	468	469	470	471	472	473	474	475	476	477	478	479	480	481	482	483	484	485	486	487	488	489	490	491	492	493	494	495	496	497	498	499	500	501	502	503	504	505	506	507	508	509	510	511	512	513	514	515	516	517	518	519	520	521	522	523	524	525	526	527	528	529	530	531	532	533	534	535	536	537	538	539	540	541	542	543	544	545	546	547	548	549	550	551	552	553	554	555	556	557	558	559	560	561	562	563	564	565	566	567	568	569	570	571	572	573	574	575	576	577	578	579	580	581	582	583	584	585	586	587	588	589	590	591	592	593	594	595	596	597	598	599	600	601	602	603	604	605	606	607	608	609	610	611	612	613	614	615	616	617	618	619	620	621	622	623	624	625	626	627	628	629	630	631	632	633	634	635	636	637	638	639	640	641	642	643	644	645	646	647	648	649	650	651	652	653	654	655	656	657	658	659	660	661	662	663	664	665	666	667	668	669	670	671	672	673	674	675	676	677	678	679	680	681	682	683	684	685	686	687	688	689	690	691	692	693	694	695	696	697	698	699	700	701	702	703	704	705	706	707	708	709	710	711	712	713	714	715	716	717	718	719	720	721	722	723	724	725	726	727	728	729	730	731	732	733	734	735	736	737	738	739	740	741	742	743	744	745	746	747	748	749	750	751	752	753	754	755	756	757	758	759	760	761	762	763	764	765	766	767	768	769	770	771	772	773	774	775	776	777	778	779	780	781	782	783	784	785	786	787	788	789	790	791	792	793	794	795	796	797	798	799	800	801	802	803	804	805	806	807	808	809	810	811	812	813	814	815	816	817	818	819	820	821	822	823	824	825	826	827	828	829	830	831	832	833	834	835	836	837	838	839	840	841	842	843	844	845	846	847	848	849	850	851	852	853	854	855	856	857	858	859	860	861	862	863	864	865	866	867	868	869	870	871	872	873	874	875	876	877	878	879	880	881	882	883	884	885	886	887	888	889	890	891	892	893	894	895	896	897	898	899	900	901	902	903	904	905	906	907	908	909	910	911	912	913	914	915	916	917	918	919	920	921	922	923	924	925	926	927	928	929	930	931	932	933	934	935	936	937	938	939	940	941	942	943	944	945	946	947	948	949	950	951	952	953	954	955	956	957	958	959	960	961	962	963	964	965	966	967	968	969	970	971	972	973	974	975	976	977	978	979	980	981	982	983	984	985	986	987	988	989	990	991	992	993	994	995	996	997	998	999	1000

Key

atomic number
atomic symbol
name
relative atomic mass

lanthanoids

actinoids

The volume of one mole of any gas is 24 dm³ at room temperature and pressure (r.t.p.).