

CANDIDATE
NAME

CENTRE
NUMBER

--	--	--	--	--

CANDIDATE
NUMBER

--	--	--	--

* 5 1 8 2 7 6 5 4 1 7 *



CHEMISTRY

0620/42

Paper 4 Theory (Extended)

October/November 2016

1 hour 15 minutes

Candidates answer on the Question Paper.

No Additional Materials are required.

READ THESE INSTRUCTIONS FIRST

Write your Centre number, candidate number and name on all the work you hand in.

Write in dark blue or black pen.

You may use an HB pencil for any diagrams or graphs.

Do not use staples, paper clips, glue or correction fluid.

DO **NOT** WRITE IN ANY BARCODES.

Answer **all** questions.

Electronic calculators may be used.

A copy of the Periodic Table is printed on page 16.

You may lose marks if you do not show your working or if you do not use appropriate units.

At the end of the examination, fasten all your work securely together.

The number of marks is given in brackets [] at the end of each question or part question.

The syllabus is approved for use in England, Wales and Northern Ireland as a Cambridge International Level 1/Level 2 Certificate.

This document consists of **15** printed pages and **1** blank page.

1 Particles behave differently when in different physical states.

- (a) Solids have a fixed volume and a definite shape.
Gases have no fixed volume and take the shape of the container.

Describe the volume and shape of liquids.

.....
..... [1]

- (b) Complete the table to show the separation, arrangement and movement of particles in each physical state.

state	separation of particles	arrangement of particles	movement of particles
solid			
liquid	touching one another	randomly arranged	move over one another
gas			

[6]

- (c) Name the following changes of state.

- (i) Ice turning into water.

..... [1]

- (ii) Solid carbon dioxide turning directly into gaseous carbon dioxide at room temperature.

..... [1]

[Total: 9]

2 This question is about atoms, ions and isotopes.

(a) Define the term *nucleon number*.

.....
..... [2]

(b) Give the electronic structure of the following atom and ion.

Na

P³⁻ [2]

(c) State **one** medical use of radioactive isotopes.

..... [1]

(d) What is meant by the term *relative atomic mass*?

.....
.....
..... [2]

(e) Suggest why the relative atomic mass of chlorine is **not** a whole number.

.....
.....
..... [2]

(f) Aluminium is a metal in Group III.

Describe the bonding in aluminium.

Include a labelled diagram and any appropriate charges in your answer.

[3]

[Total: 12]

3 Clean, dry air contains a small amount of carbon dioxide.

(a) The percentages of the **other** gases present in clean, dry air are shown in the table.

Complete the table by inserting the names of these gases.

name of gas	percentage present
	78
	21
	1

[2]

(b) Oxides of nitrogen are atmospheric pollutants which can cause acid rain.

Describe the formation of oxides of nitrogen and suggest how they can cause acid rain.

.....

.....

.....

..... [3]

(c) Methane contributes to the greenhouse effect.

State **two** sources of methane.

1

2

[2]

(d) Combustion and respiration add carbon dioxide to the atmosphere.

Name **one** natural process which removes carbon dioxide from the atmosphere.

..... [1]

[Total: 8]

4 Dilute nitric acid behaves as a typical acid in some reactions but **not** in other reactions.

- (a) Dilute nitric acid behaves as a typical acid when reacted with copper(II) oxide and with copper(II) carbonate.

Describe what you would **see** if excess dilute nitric acid is added separately to solid samples of copper(II) carbonate and copper(II) oxide followed by warming the mixtures.

copper(II) carbonate

.....

copper(II) oxide

.....

[4]

- (b) When dilute nitric acid is added to pieces of copper and heated, a reaction takes place and copper(II) nitrate is formed.

- (i) Part of the chemical equation for the reaction between copper and dilute nitric acid is shown.

Complete the chemical equation by inserting the formula of copper(II) nitrate and balancing the equation.



[2]

- (ii) How is the reaction of dilute nitric acid with copper different from that of a typical metal with a typical acid?

.....

[1]

[Total: 7]

5 Chlorine, bromine and iodine are halogens.

(a) Chlorine can be made in the laboratory by heating manganese(IV) oxide with concentrated hydrochloric acid.



Calculate the volume of $8.00 \text{ mol/dm}^3 \text{ HCl}(\text{aq})$ needed to react with 3.48 g of MnO_2 .

- moles of MnO_2 used

..... mol

- moles of HCl needed

..... mol

- volume of HCl needed

..... cm^3
[4]

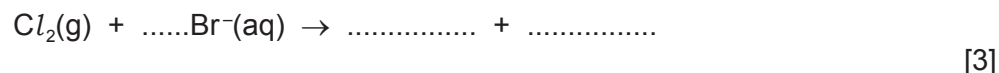
(b) A student bubbled chlorine gas into a test-tube containing aqueous potassium bromide.

(i) Describe the colour change seen in the test-tube.

from to
[2]

(ii) Complete the **ionic** equation for this reaction.

Include state symbols.



(c) When one mole of bromine, Br_2 , reacts with one mole of propene, one organic product is formed.

(i) Which part of the propene molecule reacts with bromine?

..... [1]

(ii) What is the name of the type of reaction which takes place between bromine and propene?

..... [1]

(d) When one mole of chlorine, Cl_2 , reacts with one mole of propane, a mixture of two structural isomers is formed.

(i) What is the name of the type of reaction which takes place between chlorine and propane?

..... [1]

(ii) Explain what is meant by the term *structural isomers*.

.....

..... [2]

(iii) Draw the structure of **two** structural isomers formed when **one** mole of chlorine reacts with **one** mole of propane.

[2]

(e) Iodine forms an oxide which has the composition by mass: I, 76.0%; O, 24.0%.

(i) Use this information to determine the empirical formula of this oxide of iodine.

empirical formula [3]

(ii) The oxide of iodine in (e)(i) dissolves in water.

Predict and explain the effect of adding Universal Indicator to an aqueous solution of this oxide of iodine.

effect on Universal Indicator

explanation

[2]

[Total: 21]

6 Aluminium is a very important metal.

Aluminium is extracted from its ore, bauxite, by electrolysis. Bauxite is an impure form of aluminium oxide, Al_2O_3 .

(a) Describe how aluminium is extracted from **bauxite**. Include an ionic half-equation for the reaction at each electrode.

description

.....

.....

.....

.....

.....

.....

.....

.....

.....

.....

ionic half-equation for the anode reaction

ionic half-equation for the cathode reaction.....

[5]

(b) Explain why the anodes have to be replaced regularly.

.....

..... [2]

(c) Give **two** uses of aluminium and give a reason why aluminium is suitable for each use.

use 1

reason

use 2

reason

[4]

[Total: 11]

Question 7 starts on the next page.

7 Proteins are a major constituent of food.

Proteins are polymers.

(a) What is a polymer?

.....

 [2]

(b) Proteins can be converted into amino acids.

(i) Name the type of chemical reaction which occurs when proteins are converted into amino acids.

..... [1]

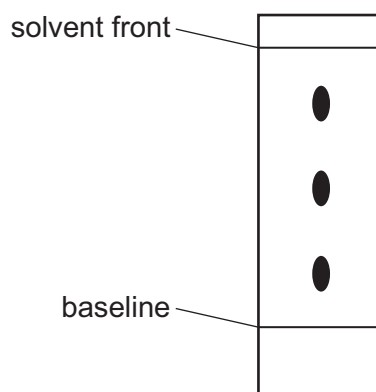
(ii) Suggest a condition needed to convert proteins into amino acids.

..... [1]

(c) A colourless mixture of amino acids was separated by chromatography.

Amino acid **X** has an R_f value of 0.8.

The chromatogram of the mixture after treatment with a locating agent is shown.



(i) How is an R_f value calculated?

$$R_f =$$

[1]

(ii) On the diagram put a ring around the spot caused by amino acid **X**.

[1]

- (iii) Describe how you would perform a chromatography experiment to produce the chromatogram shown in (c). Assume you have been given the mixture of amino acids and a suitable locating agent. You are provided with common laboratory apparatus.

.....

.....

.....

.....

.....

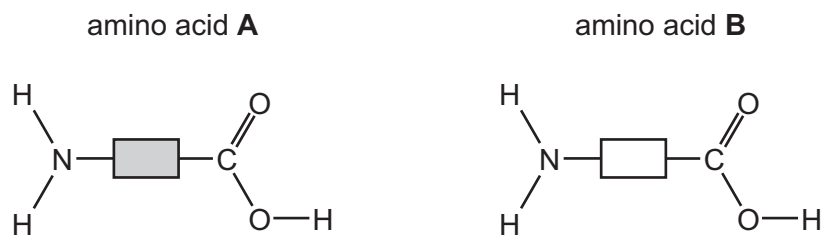
.....

..... [3]

- (d) When one molecule of an amino acid **A** combines with one molecule of another amino acid **B**, two different dipeptide molecules could be formed.

Draw the structures of the **two** different dipeptide molecules.

Show all of the atoms and all of the bonds in the linkages.



[3]

[Total: 12]

BLANK PAGE

Permission to reproduce items where third-party owned material protected by copyright is included has been sought and cleared where possible. Every reasonable effort has been made by the publisher (UCLES) to trace copyright holders, but if any items requiring clearance have unwittingly been included, the publisher will be pleased to make amends at the earliest possible opportunity.

To avoid the issue of disclosure of answer-related information to candidates, all copyright acknowledgements are reproduced online in the Cambridge International Examinations Copyright Acknowledgements Booklet. This is produced for each series of examinations and is freely available to download at www.cie.org.uk after the live examination series.

Cambridge International Examinations is part of the Cambridge Assessment Group. Cambridge Assessment is the brand name of University of Cambridge Local Examinations Syndicate (UCLES), which is itself a department of the University of Cambridge.

The Periodic Table of Elements

		Group																																																																																																																																																																																																																																																																																																																																																																																																																																																																																																																																																																																																																																																																																																																																																																																																																																																																																																																																																																																																																					
I	II	III	IV	V	VI	VII	VIII																																																																																																																																																																																																																																																																																																																																																																																																																																																																																																																																																																																																																																																																																																																																																																																																																																																																																																																																																																																																																
1	2	3	4	5	6	7	8	9	10	11	12	13	14	15	16	17	18																																																																																																																																																																																																																																																																																																																																																																																																																																																																																																																																																																																																																																																																																																																																																																																																																																																																																																																																																																																																						
Li lithium 7	Be beryllium 9	B boron 11	C carbon 12	N nitrogen 14	O oxygen 16	F fluorine 19	Ne neon 20	Na sodium 23	Mg magnesium 24	Al aluminium 27	Si silicon 28	P phosphorus 31	S sulfur 32	Cl chlorine 35.5	Ar argon 40	K potassium 39	Ca calcium 40	Sc scandium 45	Ti titanium 48	V vanadium 51	Cr chromium 52	Mn manganese 55	Fe iron 56	Co cobalt 59	Ni nickel 59	Cu copper 64	Zn zinc 65	Ga gallium 70	Ge germanium 73	As arsenic 75	Se selenium 79	Br bromine 80	Kr krypton 84	Rb rubidium 85	Sr strontium 88	Y yttrium 89	Zr zirconium 91	Nb niobium 93	Mo molybdenum 96	Tc technetium —	Ru ruthenium 101	Rh rhodium 103	Pd palladium 106	Ag silver 108	Cd cadmium 112	In indium 115	Sn tin 119	Sb antimony 122	Te tellurium 128	I iodine 127	Xe xenon 131	Cs caesium 133	Ba barium 137	La lanthanum 139	Hf hafnium 178	Ta tantalum 181	W tungsten 184	Re rhenium 186	Os osmium 190	Ir iridium 192	Pt platinum 195	Au gold 197	Hg mercury 201	Tl thallium 204	Pb lead 207	Bi bismuth 209	Po polonium —	At astatine —	Rn radon —	Fr francium —	Ra radium —	Ac actinium —	Rf rutherfordium —	Db dubnium —	Sg seaborgium —	Bh bohrium —	Hs hassium —	Mt meitnerium —	Ds darmstadtium —	Rg roentgenium —	Cn copernicium —	Fl flerovium —	Lv livermorium —	Uu ununoctium —	Og oganesson —																																																																																																																																																																																																																																																																																																																																																																																																																																																																																																																																																																																																																																																																																																																																																																																																																																																																																																																																		
3	4	5	6	7	8	9	10	11	12	13	14	15	16	17	18	19	20	21	22	23	24	25	26	27	28	29	30	31	32	33	34	35	36	37	38	39	40	41	42	43	44	45	46	47	48	49	50	51	52	53	54	55	56	57–71	72	73	74	75	76	77	78	79	80	81	82	83	84	85	86	87	88	89	90	91	92	93	94	95	96	97	98	99	100	101	102	103	104	105	106	107	108	109	110	111	112	113	114	115	116	117	118	119	120	121	122	123	124	125	126	127	128	129	130	131	132	133	134	135	136	137	138	139	140	141	142	143	144	145	146	147	148	149	150	151	152	153	154	155	156	157	158	159	160	161	162	163	164	165	166	167	168	169	170	171	172	173	174	175	176	177	178	179	180	181	182	183	184	185	186	187	188	189	190	191	192	193	194	195	196	197	198	199	200	201	202	203	204	205	206	207	208	209	210	211	212	213	214	215	216	217	218	219	220	221	222	223	224	225	226	227	228	229	230	231	232	233	234	235	236	237	238	239	240	241	242	243	244	245	246	247	248	249	250	251	252	253	254	255	256	257	258	259	260	261	262	263	264	265	266	267	268	269	270	271	272	273	274	275	276	277	278	279	280	281	282	283	284	285	286	287	288	289	290	291	292	293	294	295	296	297	298	299	300	301	302	303	304	305	306	307	308	309	310	311	312	313	314	315	316	317	318	319	320	321	322	323	324	325	326	327	328	329	330	331	332	333	334	335	336	337	338	339	340	341	342	343	344	345	346	347	348	349	350	351	352	353	354	355	356	357	358	359	360	361	362	363	364	365	366	367	368	369	370	371	372	373	374	375	376	377	378	379	380	381	382	383	384	385	386	387	388	389	390	391	392	393	394	395	396	397	398	399	400	401	402	403	404	405	406	407	408	409	410	411	412	413	414	415	416	417	418	419	420	421	422	423	424	425	426	427	428	429	430	431	432	433	434	435	436	437	438	439	440	441	442	443	444	445	446	447	448	449	450	451	452	453	454	455	456	457	458	459	460	461	462	463	464	465	466	467	468	469	470	471	472	473	474	475	476	477	478	479	480	481	482	483	484	485	486	487	488	489	490	491	492	493	494	495	496	497	498	499	500	501	502	503	504	505	506	507	508	509	510	511	512	513	514	515	516	517	518	519	520	521	522	523	524	525	526	527	528	529	530	531	532	533	534	535	536	537	538	539	540	541	542	543	544	545	546	547	548	549	550	551	552	553	554	555	556	557	558	559	560	561	562	563	564	565	566	567	568	569	570	571	572	573	574	575	576	577	578	579	580	581	582	583	584	585	586	587	588	589	590	591	592	593	594	595	596	597	598	599	600	601	602	603	604	605	606	607	608	609	610	611	612	613	614	615	616	617	618	619	620	621	622	623	624	625	626	627	628	629	630	631	632	633	634	635	636	637	638	639	640	641	642	643	644	645	646	647	648	649	650	651	652	653	654	655	656	657	658	659	660	661	662	663	664	665	666	667	668	669	670	671	672	673	674	675	676	677	678	679	680	681	682	683	684	685	686	687	688	689	690	691	692	693	694	695	696	697	698	699	700	701	702	703	704	705	706	707	708	709	710	711	712	713	714	715	716	717	718	719	720	721	722	723	724	725	726	727	728	729	730	731	732	733	734	735	736	737	738	739	740	741	742	743	744	745	746	747	748	749	750	751	752	753	754	755	756	757	758	759	760	761	762	763	764	765	766	767	768	769	770	771	772	773	774	775	776	777	778	779	780	781	782	783	784	785	786	787	788	789	790	791	792	793	794	795	796	797	798	799	800	801	802	803	804	805	806	807	808	809	810	811	812	813	814	815	816	817	818	819	820	821	822	823	824	825	826	827	828	829	830	831	832	833	834	835	836	837	838	839	840	841	842	843	844	845	846	847	848	849	850	851	852	853	854	855	856	857	858	859	860	861	862	863	864	865	866	867	868	869	870	871	872	873	874	875	876	877	878	879	880	881	882	883	884	885	886	887	888	889	890	891	892	893	894	895	896	897	898	899	900	901	902	903	904	905	906	907	908	909	910	911	912	913	914	915	916	917	918	919	920	921	922	923	924	925	926	927	928	929	930	931	932	933	934	935	936	937	938	939	940	941	942	943	944	945	946	947	948	949	950	951	952	953	954	955	956	957	958	959	960	961	962	963	964	965	966	967	968	969	970	971	972	973	974	975	976	977	978	979	980	981	982	983	984	985	986	987	988	989	990	991	992	993	994	995	996	997	998	999	1000

Key

atomic number
atomic symbol
name
relative atomic mass

lanthanoids

actinoids

The volume of one mole of any gas is 24 dm³ at room temperature and pressure (r.t.p.).